

Name : _____

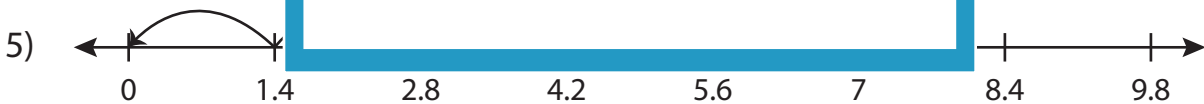
Division Sentence

Tenth: S1

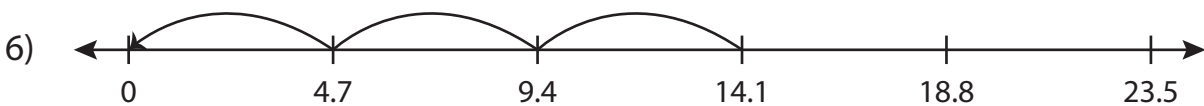
Write the division sentence that describes each model.



$$\underline{\quad} \div \underline{\quad} = \underline{\quad}$$



$$\underline{\quad} \div \underline{\quad} = \underline{\quad}$$



$$\underline{\quad} \div \underline{\quad} = \underline{\quad}$$

PREVIEW

Gain complete access to the largest collection of worksheets in all subjects!

Members, please log in to download this worksheet.

Not a member? Please sign up to gain complete access.

www.mathworksheets4kids.com

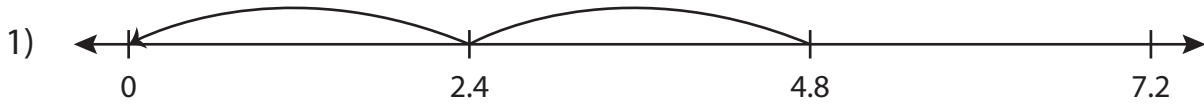
Name : _____

Answer key

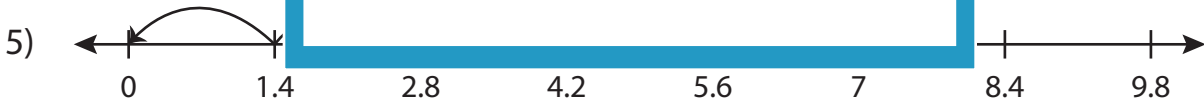
Division Sentence

Tenth: S1

Write the division sentence that describes each model.



$$\underline{4.8} \div \underline{2.4} = \underline{2}$$



$$\underline{5.6} \div \underline{1.4} = \underline{4}$$



$$\underline{14.1} \div \underline{4.7} = \underline{3}$$

PREVIEW

Gain complete access to the largest collection of worksheets in all subjects!

Members, please log in to download this worksheet.

Not a member? Please sign up to gain complete access.

www.mathworksheets4kids.com