

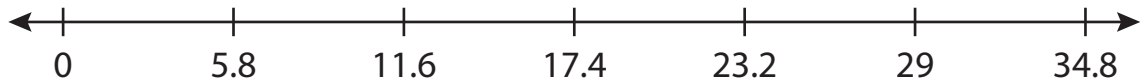
Name : _____

Number Line Division

Sheet 1

Indicate hops on each number line and complete the division sentences.

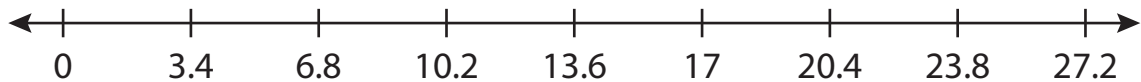
1) $29 \div 5.8 =$ _____




2) $12 \div 1.5 =$ _____



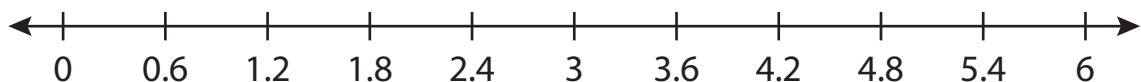
3) $17 \div 3.4 =$ _____



4) $10 \div 2.5 =$ _____



5) $6 \div 0.6 =$ _____



6) $9 \div 4.5 =$ _____

