

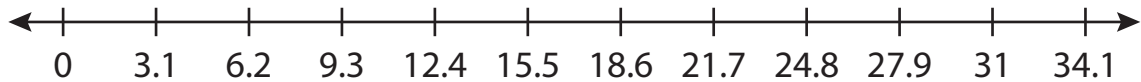
Name : _____

Number Line Division

Sheet 4

Indicate hops on each number line and complete the division sentences.

1) $31 \div 3.1 =$ _____



2) $9 \div 1.5 =$ _____



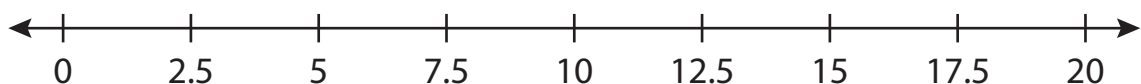
3) $27 \div 5.4 =$ _____



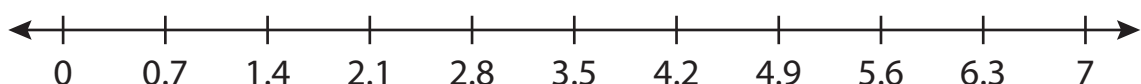
4) $34 \div 8.5 =$ _____



5) $20 \div 2.5 =$ _____



6) $7 \div 0.7 =$ _____



PREVIEW

Gain complete access to the largest collection of worksheets in all subjects!

Members, please log in to download this worksheet.

Not a member? Please sign up to gain complete access.

www.mathworksheets4kids.com