

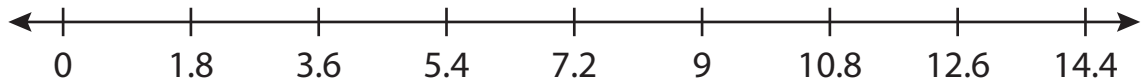
Name : _____

Number Line Division

Sheet 5

Indicate hops on each number line and complete the division sentences.

1) $9 \div 1.8 =$ _____



2) $26 \div 2.6 =$ _____



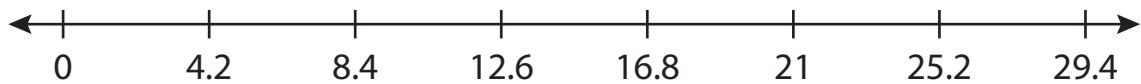
3) $3 \div 0.5 =$ _____



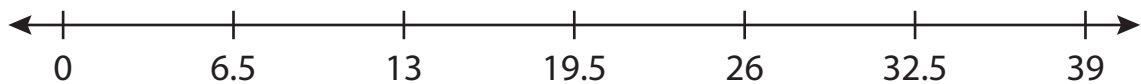
4) $28 \div 3.5 =$ _____



5) $21 \div 4.2 =$ _____



6) $39 \div 6.5 =$ _____



PREVIEW

Access the largest collection of worksheets for just **\$19.95** per year!

Members, please log in to download this worksheet. **Log in**

Not a member? Please sign up to gain complete access. **Sign up**

www.mathworksheets4kids.com

Name : _____

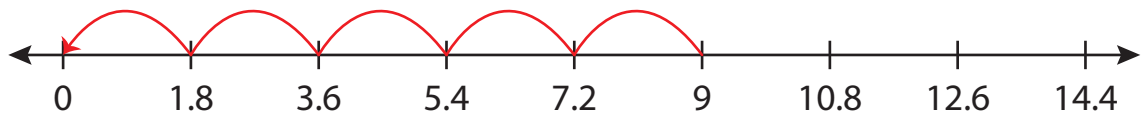
Answer key

Sheet 5

Number Line Division

Indicate hops on each number line and complete the division sentences.

1) $9 \div 1.8 = \underline{5}$



2) $26 \div 2.6 = \underline{10}$



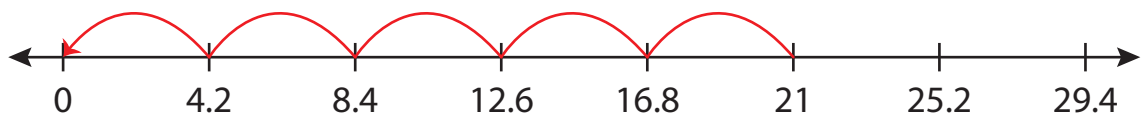
3) $3 \div 0.5 = \underline{6}$



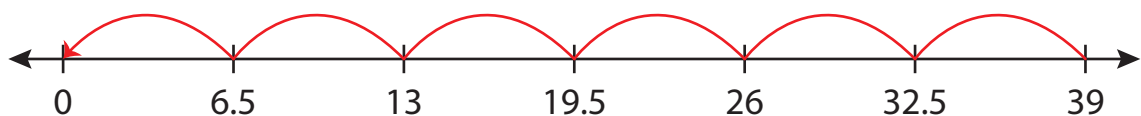
4) $28 \div 3.5 = \underline{8}$



5) $21 \div 4.2 = \underline{5}$



6) $39 \div 6.5 = \underline{6}$



PREVIEW

Access the largest collection of worksheets for just **\$19.95** per year!

Members, please log in to download this worksheet.

Log in

Not a member? Please sign up to gain complete access.

Sign up

www.mathworksheets4kids.com