

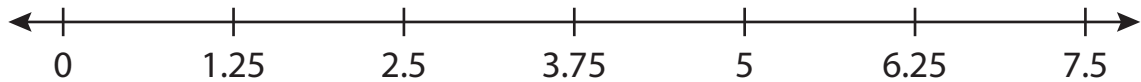
Name : \_\_\_\_\_

# Number Line Division

Hundredth: S1

Indicate hops on each number line and complete the division sentences.

1)  $2.5 \div 1.25 = \underline{\hspace{2cm}}$



2)  $24.96 \div 4.16 = \underline{\hspace{2cm}}$



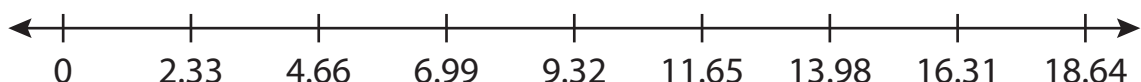
3)  $11.25 \div 3.75 = \underline{\hspace{2cm}}$



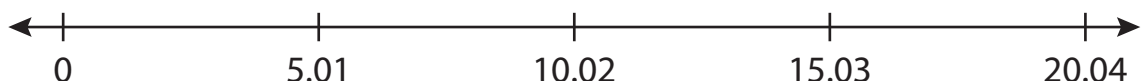
4)  $0.35 \div 0.07 = \underline{\hspace{2cm}}$



5)  $16.31 \div 2.38 = \underline{\hspace{2cm}}$



6)  $5.01 \div 5.01 = \underline{\hspace{2cm}}$



**PREVIEW**

Gain complete access to the largest collection of worksheets in all subjects!

Members, please log in to download this worksheet.

Not a member? Please sign up to gain complete access.

[www.mathworksheets4kids.com](http://www.mathworksheets4kids.com)