

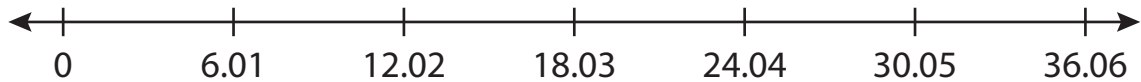
Name : _____

Number Line Division

Hundredth: S2

Indicate hops on each number line and complete the division sentences.

1) $18.03 \div 6.01 =$ _____



2) $5.8 \div 1.45 =$ _____



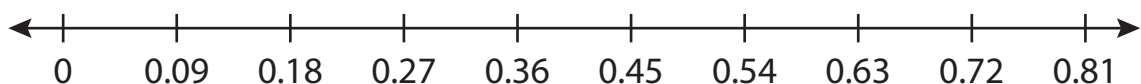
3) $29.16 \div 4.80 =$ _____



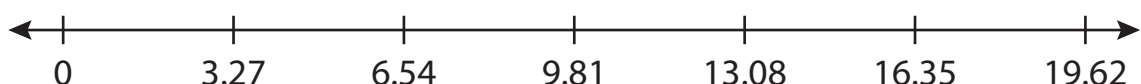
4) $4.3 \div 2.14 =$ _____



5) $0.81 \div 0.09 =$ _____



6) $16.35 \div 3.27 =$ _____



PREVIEW

Gain complete access to the largest collection of worksheets in all subjects!

Members, please log in to download this worksheet.

Not a member? Please sign up to gain complete access.

www.mathworksheets4kids.com