


Name : \_\_\_\_\_

# Number Line Division

Hundredth: S3

Indicate hops on each number line and complete the division sentences.

1)  $0.75 \div 0.15 =$  \_\_\_\_\_



2)  $11.49 \div 3.82 =$  \_\_\_\_\_




3)  $8.82 \div 1.20 =$  \_\_\_\_\_



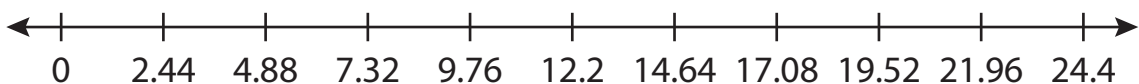
4)  $25.28 \div 6.30 =$  \_\_\_\_\_



5)  $9.5 \div 4.75 =$  \_\_\_\_\_



6)  $14.64 \div 2.44 =$  \_\_\_\_\_



**PREVIEW**

Gain complete access to the largest collection of worksheets in all subjects!

Members, please log in to download this worksheet.

Not a member? Please sign up to gain complete access.

[www.mathworksheets4kids.com](http://www.mathworksheets4kids.com)