

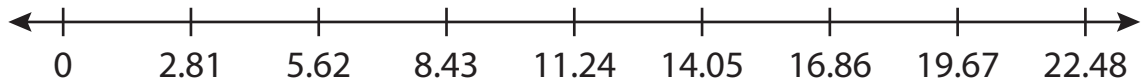
Name : _____

Number Line Division

Hundredth: S4

Indicate hops on each number line and complete the division sentences.

1) $11.24 \div 2.81 =$ _____



2) $2.8 \div 0.56 =$ _____




3) $6.74 \div 3.37 =$ _____




4) $29.96 \div 4.28 =$ _____



5) $8.58 \div 1.43 =$ _____



6) $25.7 \div 5.14 =$ _____



PREVIEW

Access the largest collection of worksheets for just **\$19.95** per year!

Members, please log in to download this worksheet. **Log in**

Not a member? Please sign up to gain complete access. **Sign up**

www.mathworksheets4kids.com

Name : _____

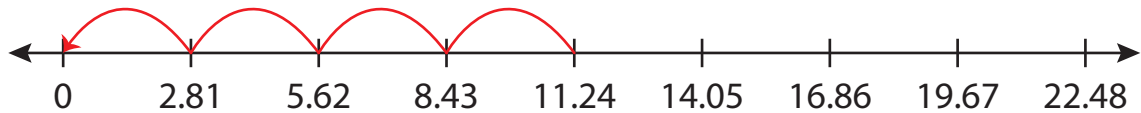
Answer key

Number Line Division

Hundredth: S4

Indicate hops on each number line and complete the division sentences.

1) $11.24 \div 2.81 = \underline{4}$



2) $2.8 \div 0.56 = \underline{5}$



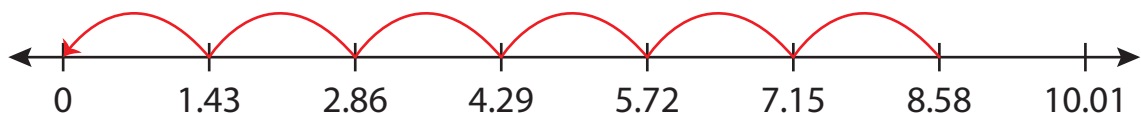
3) $6.74 \div 3.37 = \underline{2}$



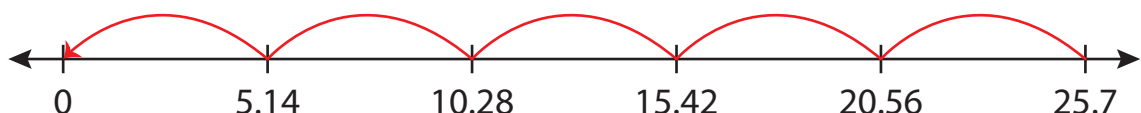
4) $29.96 \div 4.28 = \underline{7}$



5) $8.58 \div 1.43 = \underline{6}$



6) $25.7 \div 5.14 = \underline{5}$



PREVIEW

Access the largest collection of
worksheets for just **\$19.95** per year!

Members, please
log in to
download this
worksheet.

Log in

Not a member?
Please sign up to
gain complete
access.

Sign up

www.mathworksheets4kids.com