

Name : \_\_\_\_\_

# Number Line Division

Hundredth: S5

Indicate hops on each number line and complete the division sentences.

1)  $2.67 \div 0.89 =$  \_\_\_\_\_



2)  $15.42 \div 2.57 =$  \_\_\_\_\_



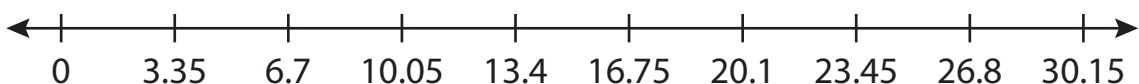
3)  $20.12 \div 5.02 =$  \_\_\_\_\_



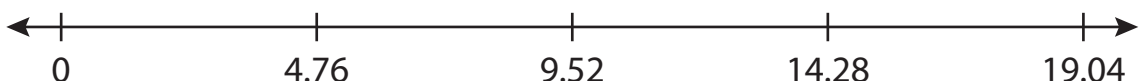
4)  $6.1 \div 1.22 =$  \_\_\_\_\_



5)  $26.8 \div 3.3 =$  \_\_\_\_\_



6)  $4.76 \div 4.76 =$  \_\_\_\_\_



**PREVIEW**

Access the largest collection of worksheets for just **\$19.95** per year!

Members, please log in to download this worksheet. **Log in**

Not a member? Please sign up to gain complete access. **Sign up**

[www.mathworksheets4kids.com](http://www.mathworksheets4kids.com)

Name : \_\_\_\_\_

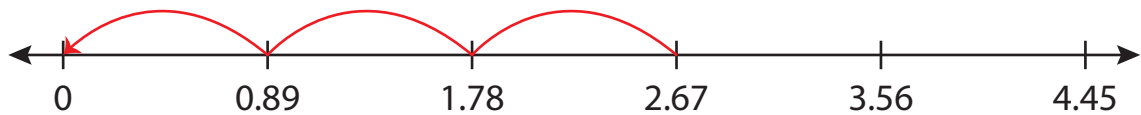
## Answer key

# Number Line Division

Hundredth: S5

Indicate hops on each number line and complete the division sentences.

1)  $2.67 \div 0.89 = \underline{3}$



2)  $15.42 \div 2.57 = \underline{6}$



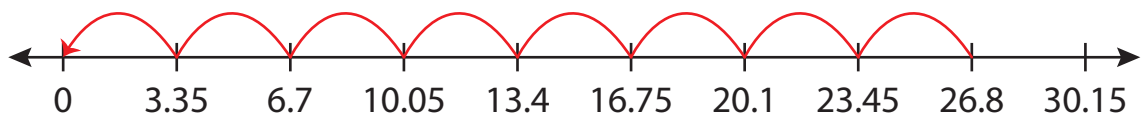
3)  $20.12 \div 5.02 = \underline{4}$



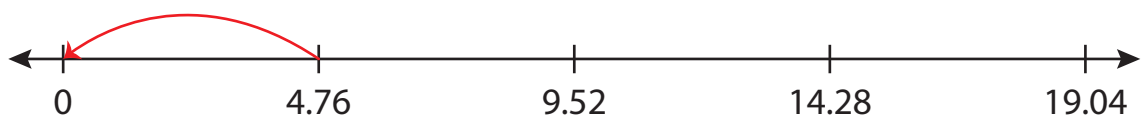
4)  $6.1 \div 1.27 = \underline{5}$



5)  $26.8 \div 3.3 = \underline{8}$



6)  $4.76 \div 4.76 = \underline{1}$



**PREVIEW**

Access the largest collection of worksheets for just **\$19.95** per year!

Members, please log in to download this worksheet. **Log in**

Not a member? Please sign up to gain complete access. **Sign up**

[www.mathworksheets4kids.com](http://www.mathworksheets4kids.com)