

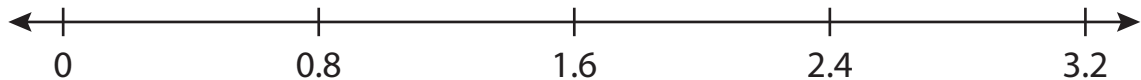
Name : _____

Number Line Division

Tenth: S1

Indicate hops on each number line and complete the division sentences.


1) $2.4 \div 0.8 =$ _____




2) $5.5 \div 1.1 =$ _____



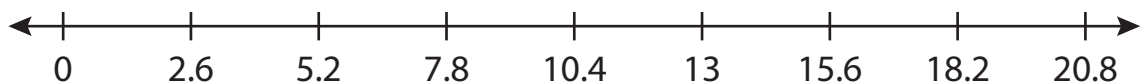
3) $7.2 \div 7.2 =$ _____



4) $6.8 \div 3.4 =$ _____



5) $20.8 \div 2.6 =$ _____



6) $0.4 \div 0.1 =$ _____

