

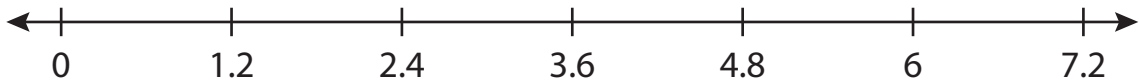
Name : _____

Number Line Division

Tenth: S2

Indicate hops on each number line and complete the division sentences.

1) $4.8 \div 1.2 =$ _____



2) $1.5 \div 0.5 =$ _____




3) $5.8 \div 2.9 =$ _____



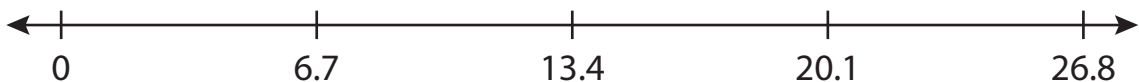
4) $30.1 \div 4.3 =$ _____



5) $3.6 \div 0.6 =$ _____



6) $6.7 \div 6.7 =$ _____



PREVIEW

Gain complete access to the largest collection of worksheets in all subjects!

Members, please log in to download this worksheet.

Not a member? Please sign up to gain complete access.

www.mathworksheets4kids.com