

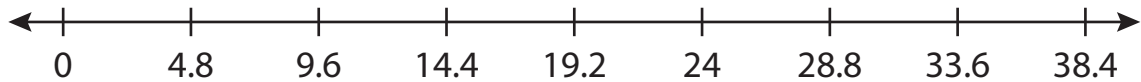
Name : \_\_\_\_\_

# Number Line Division

Tenth: S3

Indicate hops on each number line and complete the division sentences.

1)  $9.6 \div 4.8 =$  \_\_\_\_\_



2)  $3.9 \div 1.3 =$  \_\_\_\_\_



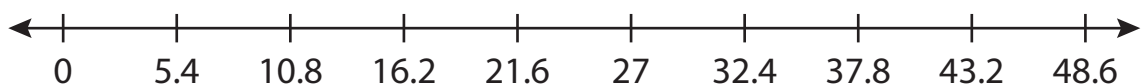
3)  $15.5 \div 3.1 =$  \_\_\_\_\_



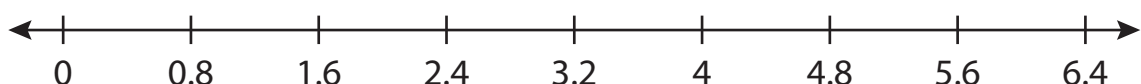
4)  $8.8 \div 2.2 =$  \_\_\_\_\_



5)  $5.4 \div 5.4 =$  \_\_\_\_\_



6)  $6.4 \div 0.8 =$  \_\_\_\_\_



**PREVIEW**

Gain complete access to the largest collection of worksheets in all subjects!

Members, please log in to download this worksheet.

Not a member? Please sign up to gain complete access.

[www.mathworksheets4kids.com](http://www.mathworksheets4kids.com)