


Name : _____

Number Line Division

Tenth: 54

Indicate hops on each number line and complete the division sentences.

1) $1.5 \div 0.3 =$ _____



2) $31.5 \div 4.5 =$ _____



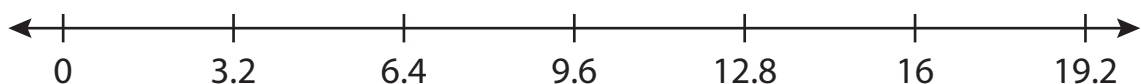
3) $5.6 \div 0.7 =$ _____




4) $9.3 \div 9.3 =$ _____



5) $19.2 \div 3.2 =$ _____



6) $7.2 \div 1.8 =$ _____



PREVIEW

Access the largest collection of worksheets for just **\$19.95** per year!

Members, please log in to download this worksheet. **Log in**

Not a member? Please sign up to gain complete access. **Sign up**

www.mathworksheets4kids.com

Name : _____

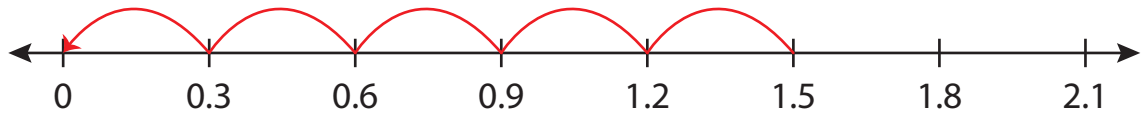
Answer key

Number Line Division

Tenth: 54

Indicate hops on each number line and complete the division sentences.

1) $1.5 \div 0.3 = \underline{5}$



2) $31.5 \div 4.5 = \underline{7}$



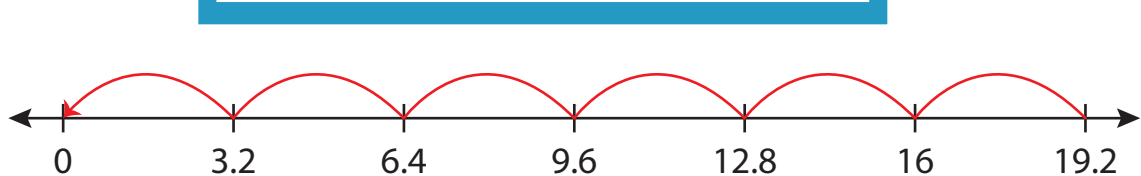
3) $5.6 \div 0.7 = \underline{8}$



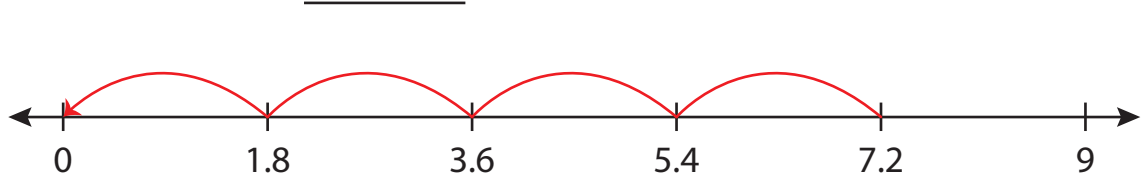
4) $9.3 \div 9.3 = \underline{1}$



5) $19.2 \div 3.2 = \underline{6}$



6) $7.2 \div 1.8 = \underline{4}$



PREVIEW

Access the largest collection of worksheets for just **\$19.95** per year!

Members, please log in to download this worksheet. **Log in**

Not a member? Please sign up to gain complete access. **Sign up**

www.mathworksheets4kids.com