

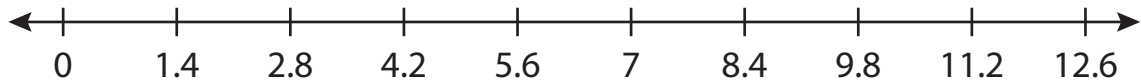
Name : _____

Number Line Division

Tenth: S5

Indicate hops on each number line and complete the division sentences.

1) $8.4 \div 1.4 =$ _____



2) $9.2 \div 2.3 =$ _____




3) $4.4 \div 4.4 =$ _____



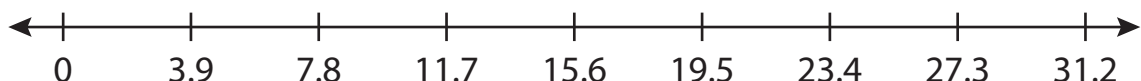
4) $16.8 \div 5.6 =$ _____



5) $14.6 \div 7.3 =$ _____



6) $27.3 \div 3.9 =$ _____



PREVIEW

Access the largest collection of worksheets for just **\$19.95** per year!

Members, please log in to download this worksheet. **Log in**

Not a member? Please sign up to gain complete access. **Sign up**

www.mathworksheets4kids.com

Name : _____

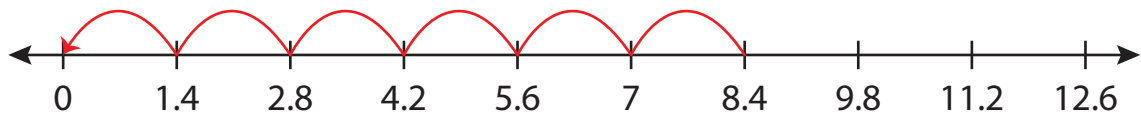
Answer key

Number Line Division

Tenth: 55

Indicate hops on each number line and complete the division sentences.

1) $8.4 \div 1.4 = \underline{6}$



2) $9.2 \div 2.3 = \underline{4}$



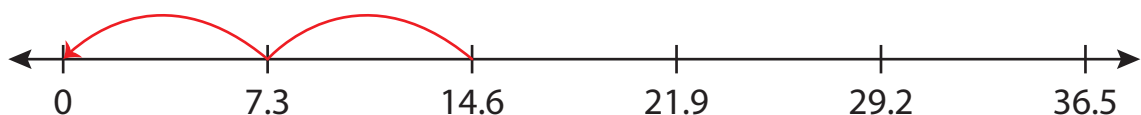
3) $4.4 \div 4.4 = \underline{1}$



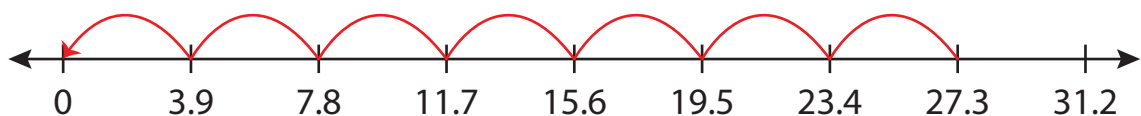
4) $16.8 \div 5.6 = \underline{3}$



5) $14.6 \div 7.3 = \underline{2}$



6) $27.3 \div 3.9 = \underline{7}$



PREVIEW

Access the largest collection of worksheets for just **\$19.95** per year!

Members, please log in to download this worksheet. **Log in**

Not a member? Please sign up to gain complete access. **Sign up**

www.mathworksheets4kids.com