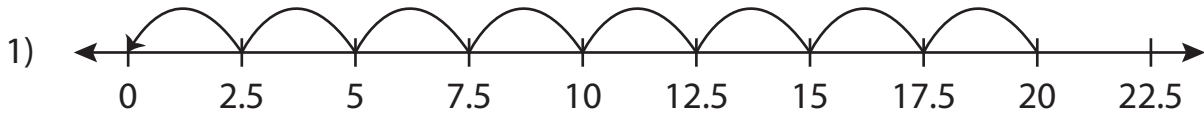


Name: \_\_\_\_\_

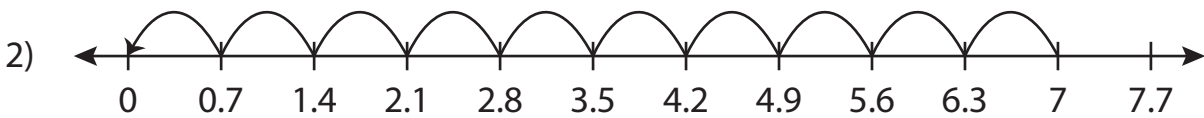
# Missing Numbers

Sheet 1

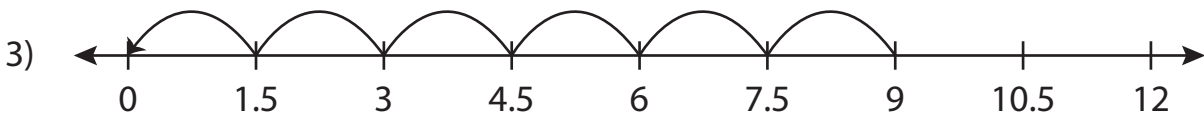
Complete the division sentence that describes each model.



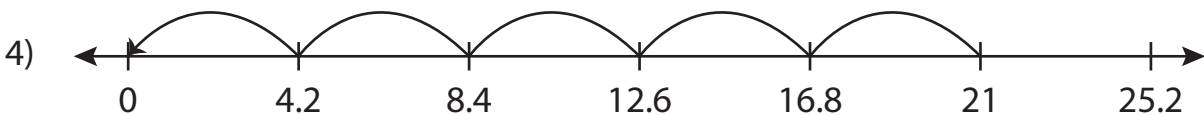
$$20 \div \underline{\quad} = 8$$



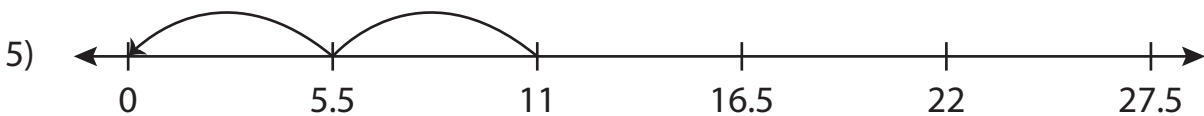
$$7 \div 0.7 = \underline{\quad}$$



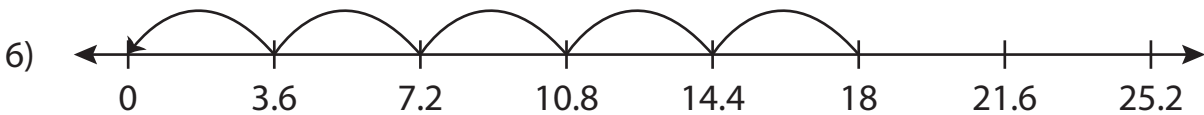
$$\underline{\quad} \div 1.5 = 6$$



$$21 \div 4.2 = \underline{\quad}$$



$$11 \div \underline{\quad} = 2$$



$$\underline{\quad} \div 3.6 = 5$$

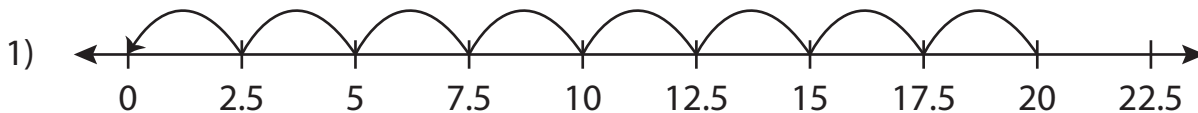
Name: \_\_\_\_\_

## Answer key

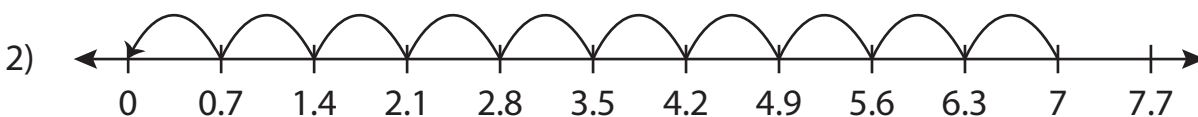
# Missing Numbers

Sheet 1

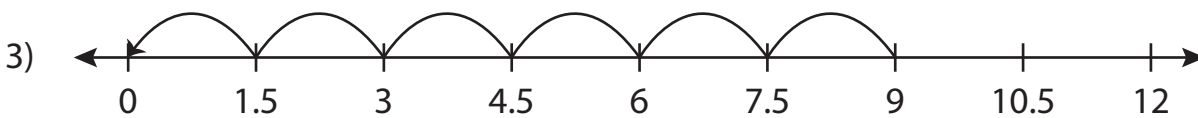
Complete the division sentence that describes each model.



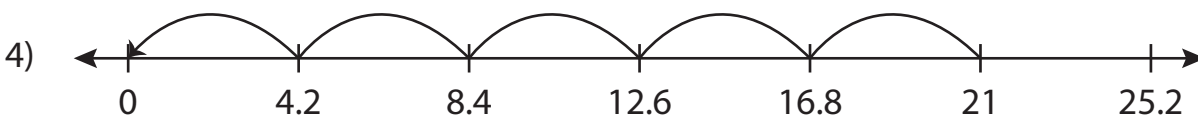
$$20 \div \underline{2.5} = 8$$



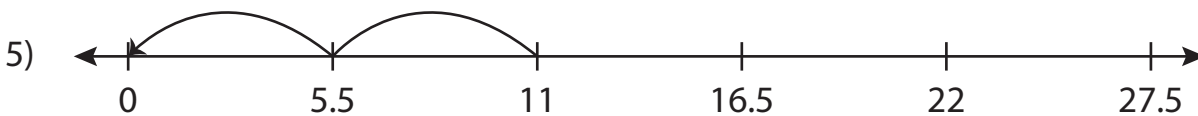
$$7 \div 0.7 = \underline{10}$$



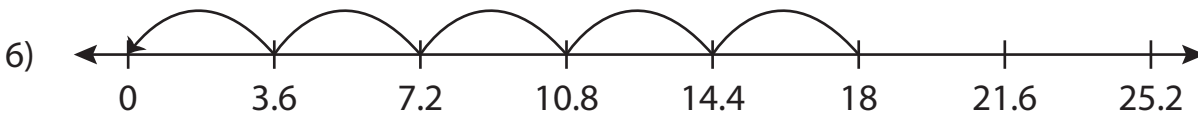
$$\underline{9} \div 1.5 = 6$$



$$21 \div 4.2 = \underline{5}$$



$$11 \div \underline{5.5} = 2$$



$$\underline{18} \div 3.6 = 5$$