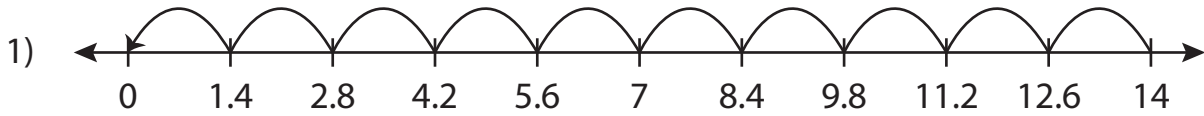


Name : _____

Missing Numbers

Sheet 2

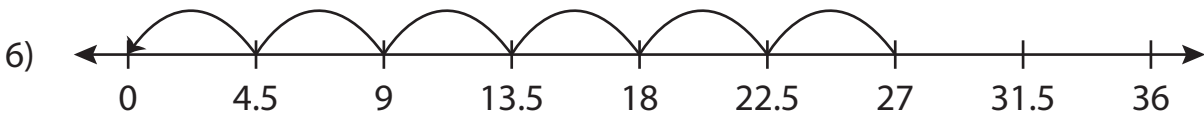
Complete the division sentence that describes each model.



$$\underline{\quad} \div 1.4 = 10$$



$$\underline{\quad} \div 3.5 = 4$$



$$27 \div 4.5 = \underline{\quad}$$

PREVIEW

Access the largest collection of worksheets for just **\$19.95** per year!

Members, please log in to download this worksheet. **Log in**

Not a member? Please sign up to gain complete access. **Sign up**

www.mathworksheets4kids.com

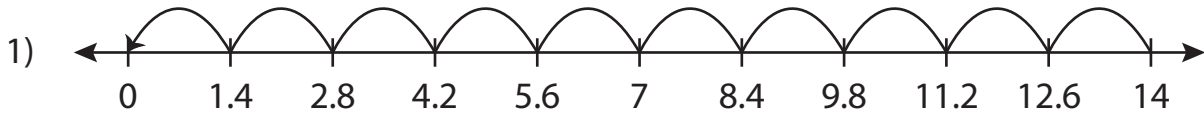
Name : _____

Answer key

Missing Numbers

Sheet 2

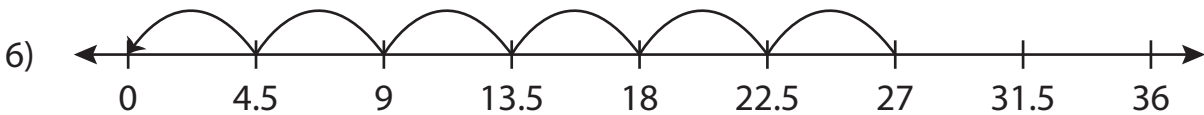
Complete the division sentence that describes each model.



$$\underline{14} \div 1.4 = 10$$



$$\underline{14} \div 3.5 = 4$$



$$27 \div 4.5 = \underline{6}$$

PREVIEW

Access the largest collection of worksheets for just **\$19.95** per year!

Members, please log in to download this worksheet. **Log in**

Not a member? Please sign up to gain complete access. **Sign up**

www.mathworksheets4kids.com