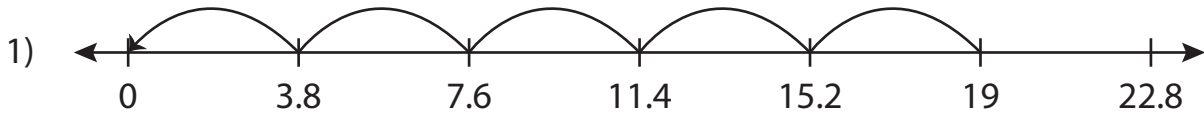


Name : _____

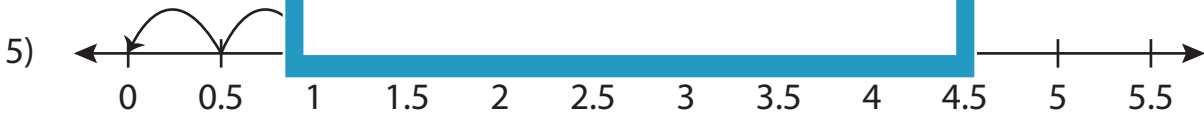
Missing Numbers

Sheet 3

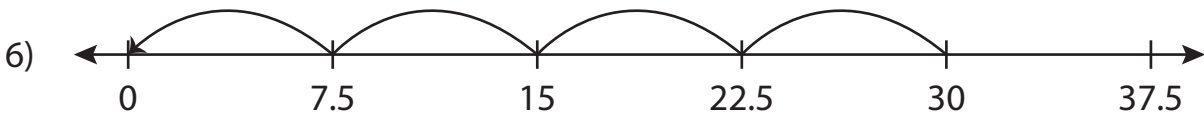
Complete the division sentence that describes each model.



$$19 \div \underline{\quad} = 5$$



$$4 \div 0.5 = \underline{\quad}$$



$$30 \div \underline{\quad} = 4$$

PREVIEW

Access the largest collection of worksheets for just **\$19.95** per year!

Members, please log in to download this worksheet. **Log in**

Not a member? Please sign up to gain complete access. **Sign up**

www.mathworksheets4kids.com

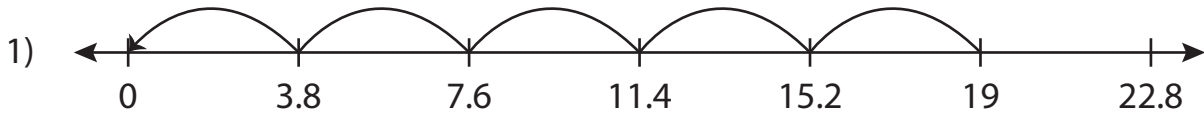
Name: _____

Answer key

Missing Numbers

Sheet 3

Complete the division sentence that describes each model.



$$19 \div \underline{3.8} = 5$$



$$4 \div 0.5 = \underline{8}$$



$$30 \div \underline{7.5} = 4$$

PREVIEW

Access the largest collection of
worksheets for just **\$19.95** per year!

Members, please
log in to
download this
worksheet.

Log in

Not a member?
Please sign up to
gain complete
access.

Sign up

www.mathworksheets4kids.com