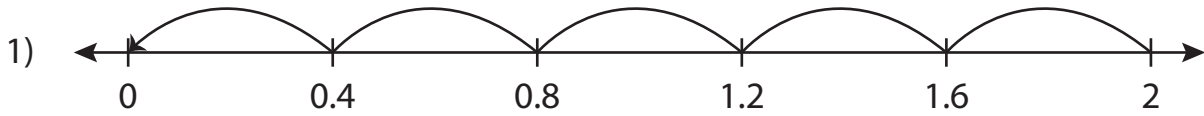


Name: _____

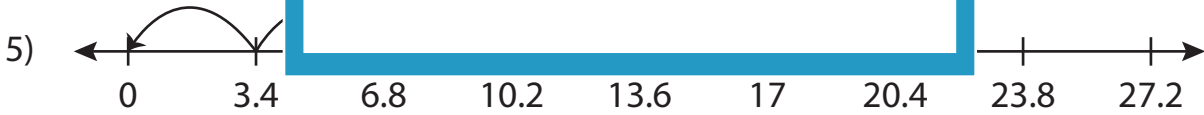
Missing Numbers

Sheet 4

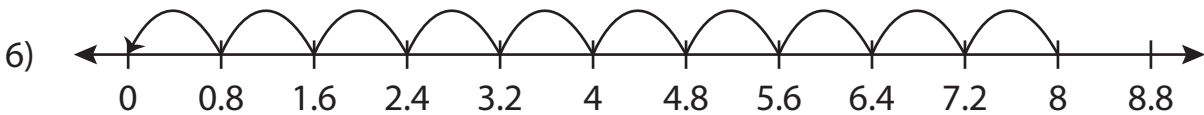
Complete the division sentence that describes each model.



$$2 \div 0.4 = \underline{\quad}$$



$$17 \div \underline{\quad} = 5$$



$$\underline{\quad} \div 0.8 = 10$$

PREVIEW

Access the largest collection of worksheets for just **\$19.95** per year!

Members, please log in to download this worksheet. **Log in**

Not a member? Please sign up to gain complete access. **Sign up**

www.mathworksheets4kids.com

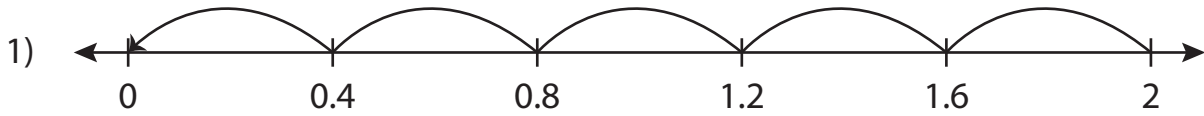
Name: _____

Answer key

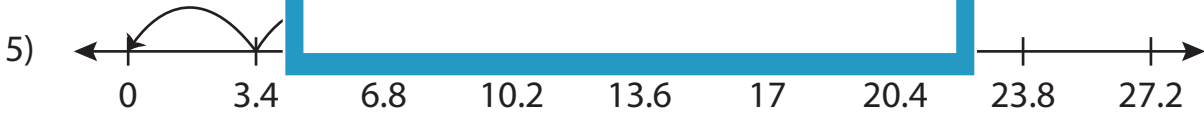
Missing Numbers

Sheet 4

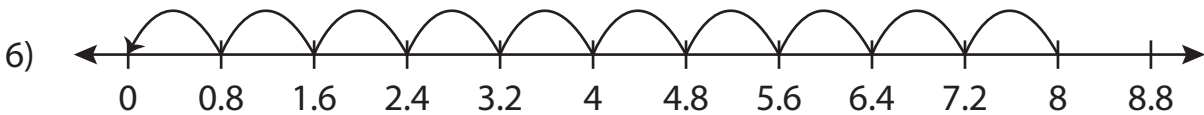
Complete the division sentence that describes each model.



$$2 \div 0.4 = \underline{5}$$



$$17 \div \underline{3.4} = 5$$



$$\underline{8} \div 0.8 = 10$$

PREVIEW

Access the largest collection of worksheets for just **\$19.95** per year!

Members, please log in to download this worksheet. **Log in**

Not a member? Please sign up to gain complete access. **Sign up**

www.mathworksheets4kids.com