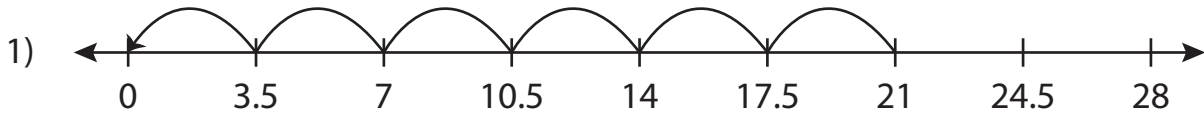


Name : \_\_\_\_\_

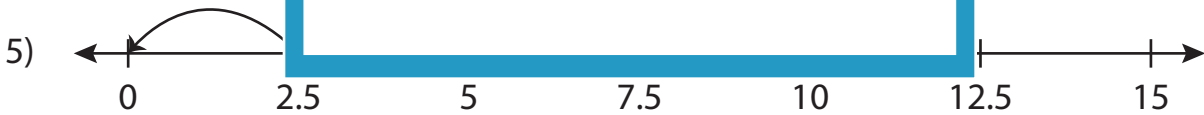
# Missing Numbers

Sheet 5

Complete the division sentence that describes each model.



$$21 \div \underline{\quad} = 6$$



$$\underline{\quad} \div 2.5 = 4$$



$$3 \div 0.6 = \underline{\quad}$$

**PREVIEW**

Access the largest collection of worksheets for just **\$19.95** per year!

Members, please log in to download this worksheet. **Log in**

Not a member? Please sign up to gain complete access. **Sign up**

[www.mathworksheets4kids.com](http://www.mathworksheets4kids.com)

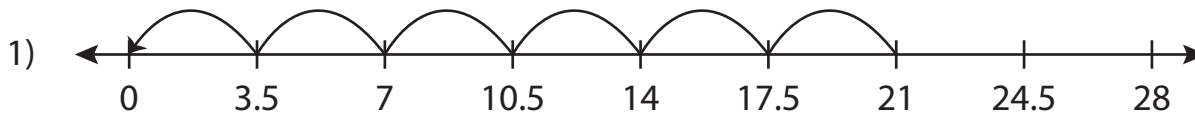
Name: \_\_\_\_\_

## Answer key

# Missing Numbers

Sheet 5

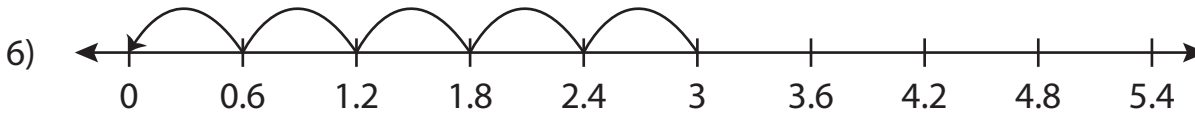
Complete the division sentence that describes each model.



$$21 \div \underline{3.5} = 6$$



$$\underline{10} \div 2.5 = 4$$



$$3 \div 0.6 = \underline{5}$$

**PREVIEW**

Access the largest collection of worksheets for just **\$19.95** per year!

Members, please log in to download this worksheet. **Log in**

Not a member? Please sign up to gain complete access. **Sign up**

[www.mathworksheets4kids.com](http://www.mathworksheets4kids.com)