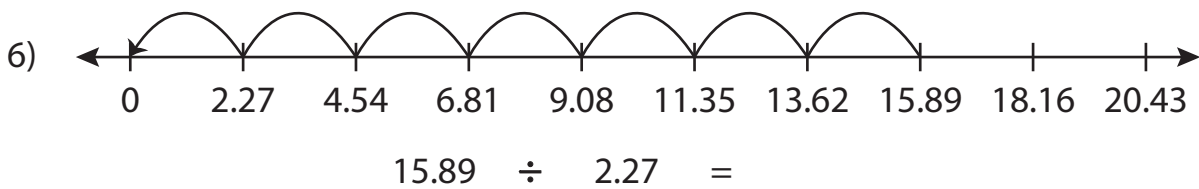
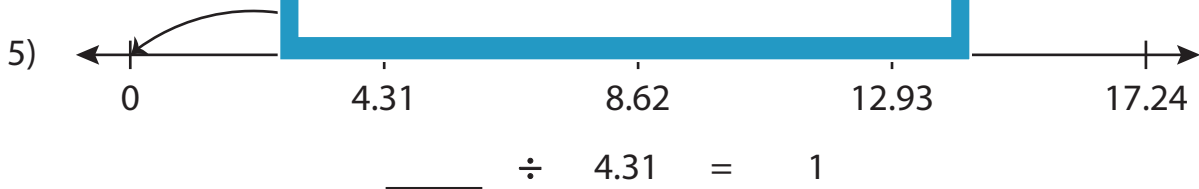
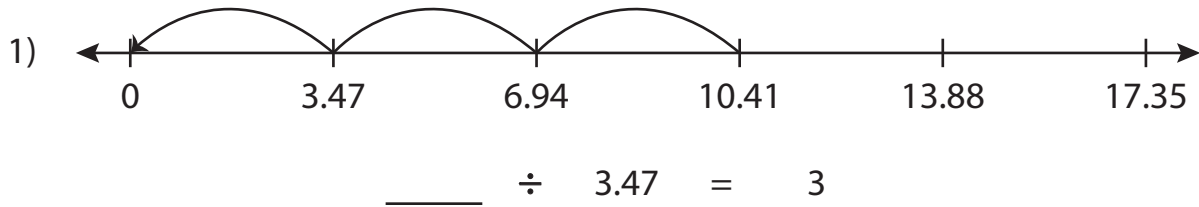


Name : _____

Missing Numbers

Hundredth: S1

Complete the division sentence that describes each model.



PREVIEW

Access the largest collection of worksheets for just **\$19.95** per year!

Members, please log in to download this worksheet. **Log in**

Not a member? Please sign up to gain complete access. **Sign up**

www.mathworksheets4kids.com

Name : _____

Answer key

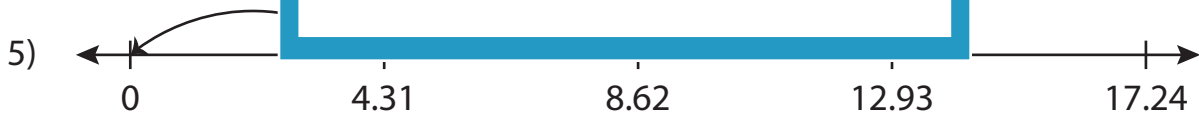
Missing Numbers

Hundredth: S1

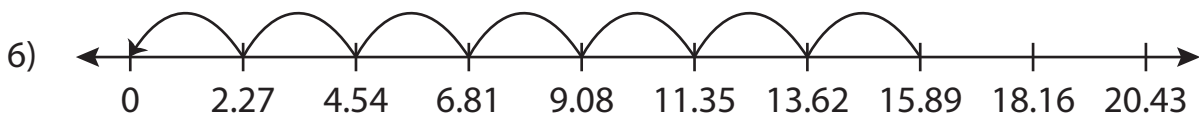
Complete the division sentence that describes each model.



$$\underline{10.41} \div 3.47 = 3$$



$$\underline{4.31} \div 4.31 = 1$$



$$15.89 \div 2.27 = \underline{7}$$

PREVIEW

Access the largest collection of worksheets for just **\$19.95** per year!

Members, please log in to download this worksheet. **Log in**

Not a member? Please sign up to gain complete access. **Sign up**

www.mathworksheets4kids.com