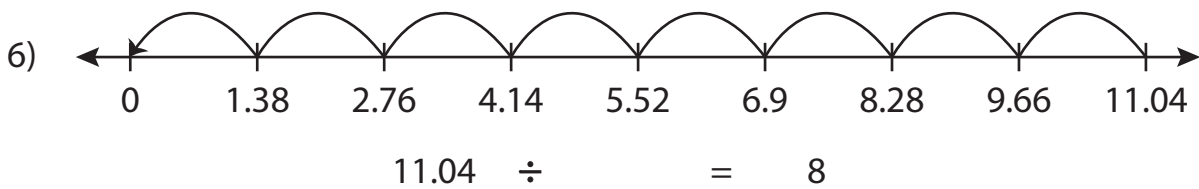
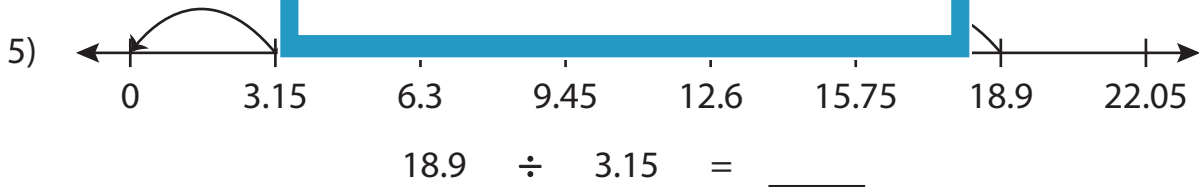
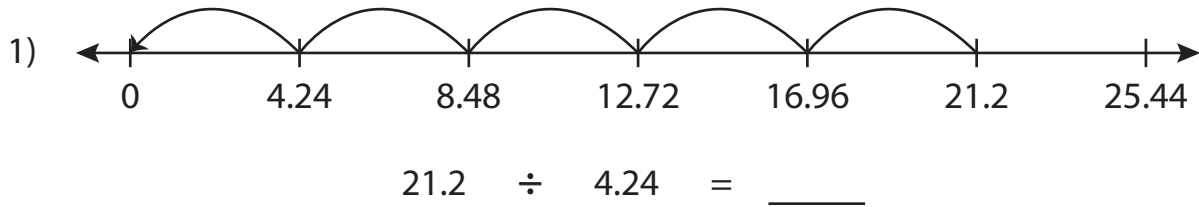


Name : _____

Missing Numbers

Hundredth: S2

Complete the division sentence that describes each model.



PREVIEW

Access the largest collection of worksheets for just **\$19.95** per year!

Members, please log in to download this worksheet. **Log in**

Not a member? Please sign up to gain complete access. **Sign up**

www.mathworksheets4kids.com

Name : _____

Answer key

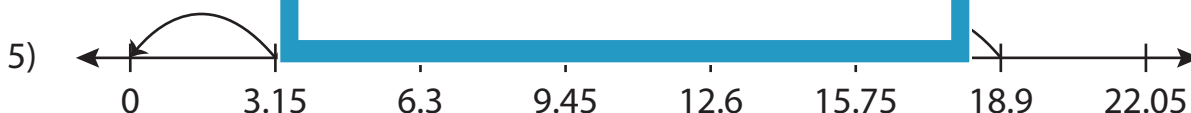
Missing Numbers

Hundredth: S2

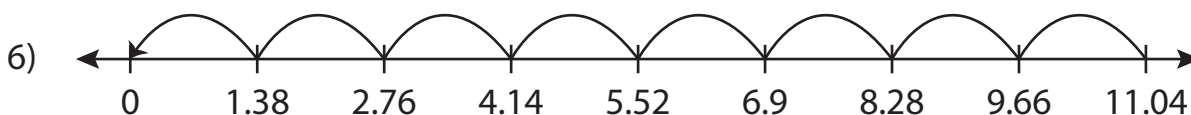
Complete the division sentence that describes each model.



$$21.2 \div 4.24 = \underline{5}$$



$$18.9 \div 3.15 = \underline{6}$$



$$11.04 \div \underline{1.38} = 8$$

PREVIEW

Access the largest collection of worksheets for just **\$19.95** per year!

Members, please log in to download this worksheet. **Log in**

Not a member? Please sign up to gain complete access. **Sign up**

www.mathworksheets4kids.com