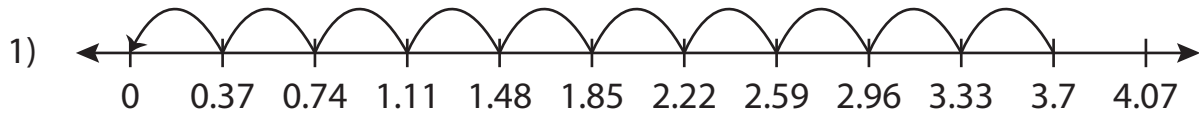


Name : _____

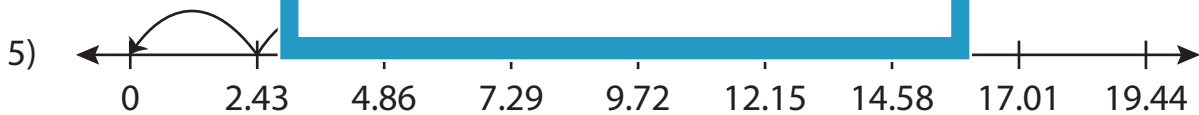
Missing Numbers

Hundredth: S3

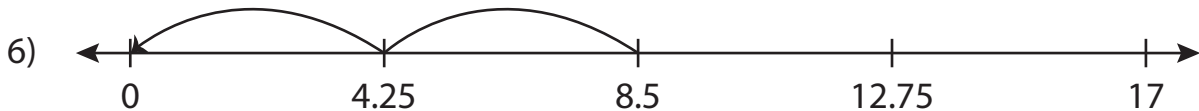
Complete the division sentence that describes each model.



$$3.7 \div \underline{\quad} = 10$$



$$12.15 \div \underline{\quad} = 5$$



$$\underline{\quad} \div 4.25 = 2$$

PREVIEW

Access the largest collection of worksheets for just **\$19.95** per year!

Members, please log in to download this worksheet. **Log in**

Not a member? Please sign up to gain complete access. **Sign up**

www.mathworksheets4kids.com

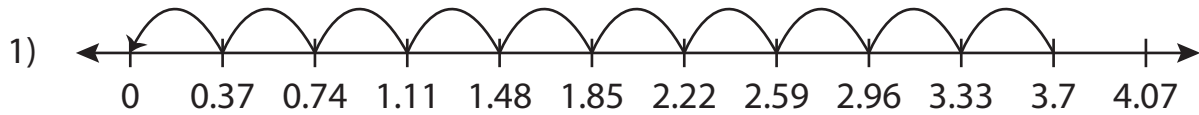
Name: _____

Answer key

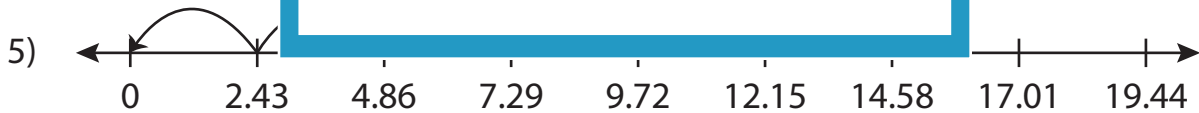
Missing Numbers

Hundredth: S3

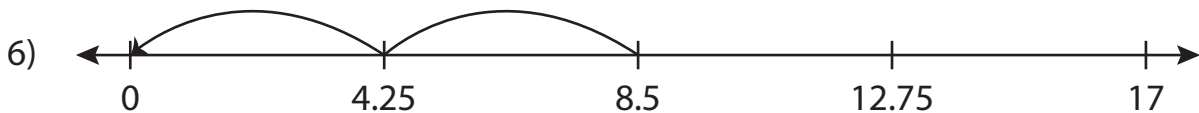
Complete the division sentence that describes each model.



$$3.7 \div \underline{0.37} = 10$$



$$12.15 \div \underline{2.43} = 5$$



$$\underline{8.5} \div 4.25 = 2$$

PREVIEW

Access the largest collection of worksheets for just **\$19.95** per year!

Members, please log in to download this worksheet. **Log in**

Not a member? Please sign up to gain complete access. **Sign up**

www.mathworksheets4kids.com