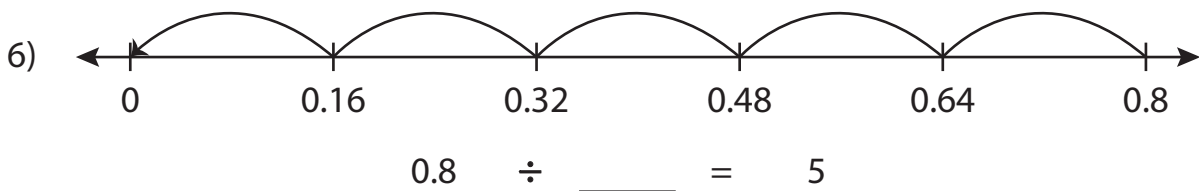
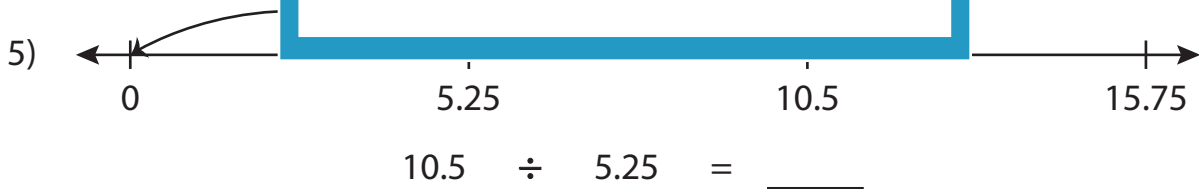
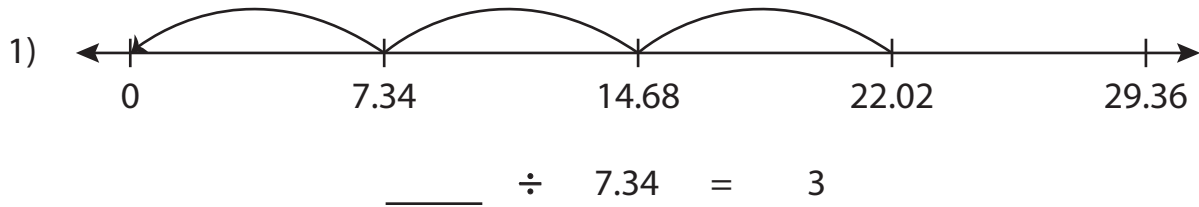


Name : _____

Missing Numbers

Hundredth: S4

Complete the division sentence that describes each model.



PREVIEW

Access the largest collection of worksheets for just **\$19.95** per year!

Members, please log in to download this worksheet. **Log in**

Not a member? Please sign up to gain complete access. **Sign up**

www.mathworksheets4kids.com

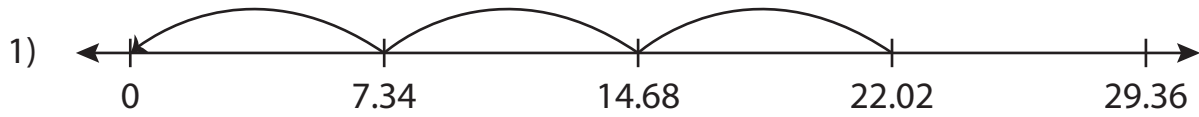
Name : _____

Answer key

Missing Numbers

Hundredth: S4

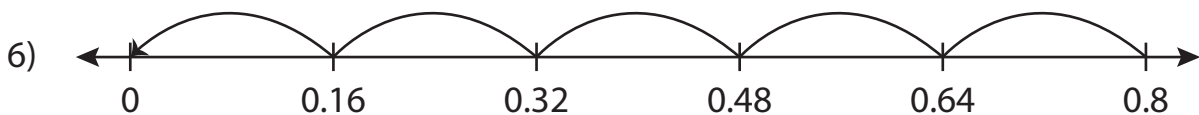
Complete the division sentence that describes each model.



$$\underline{22.02} \div 7.34 = 3$$



$$10.5 \div 5.25 = \underline{2}$$



$$0.8 \div \underline{0.16} = 5$$

PREVIEW

Access the largest collection of worksheets for just **\$19.95** per year!

Members, please log in to download this worksheet. **Log in**

Not a member? Please sign up to gain complete access. **Sign up**

www.mathworksheets4kids.com