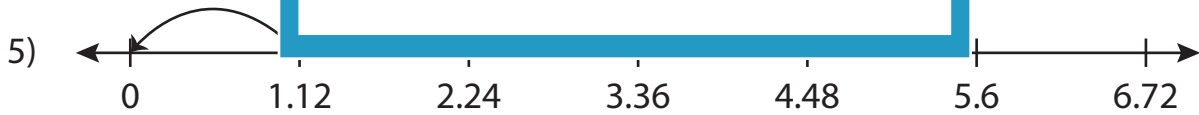
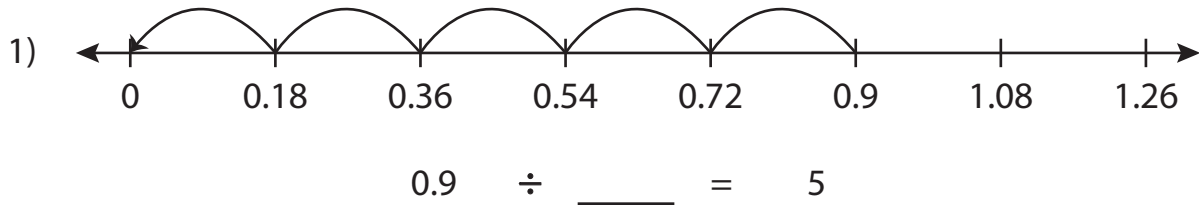


Name : \_\_\_\_\_

# Missing Numbers

Hundredth: S5

Complete the division sentence that describes each model.



$\underline{\quad} \div 1.12 = 4$



$10.05 \div 3.35 = \underline{\quad}$

**PREVIEW**

Access the largest collection of worksheets for just **\$19.95** per year!

Members, please log in to download this worksheet. **Log in**

Not a member? Please sign up to gain complete access. **Sign up**

[www.mathworksheets4kids.com](http://www.mathworksheets4kids.com)

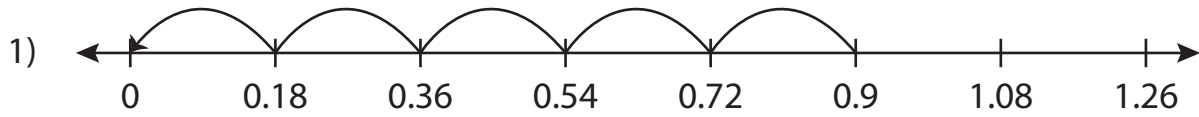
Name : \_\_\_\_\_

## Answer key

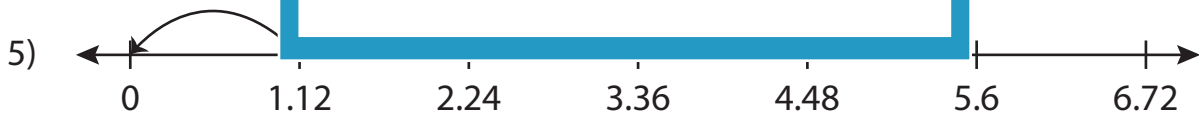
# Missing Numbers

Hundredth: S5

Complete the division sentence that describes each model.



$$0.9 \div \underline{0.18} = 5$$



$$\underline{4.48} \div 1.12 = 4$$



$$10.05 \div 3.35 = \underline{3}$$

**PREVIEW**

Access the largest collection of worksheets for just **\$19.95** per year!

Members, please log in to download this worksheet. **Log in**

Not a member? Please sign up to gain complete access. **Sign up**

[www.mathworksheets4kids.com](http://www.mathworksheets4kids.com)