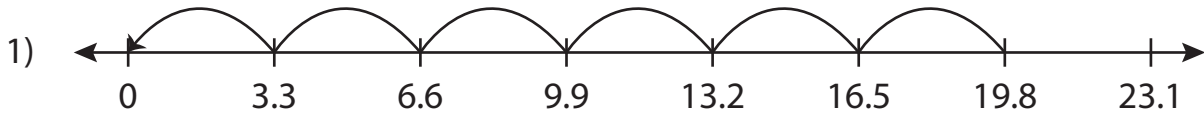


Name: _____

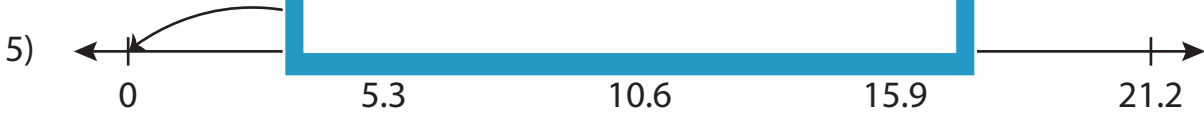
Missing Numbers

Tenth: S1

Complete the division sentence that describes each model.



$$\underline{\quad} \div 3.3 = 6$$



$$15.9 \div \underline{\quad} = 3$$



$$9.9 \div 1.1 = \underline{\quad}$$

PREVIEW

Gain complete access to the largest collection of worksheets in all subjects!

Members, please log in to download this worksheet.

Not a member? Please sign up to gain complete access.

www.mathworksheets4kids.com

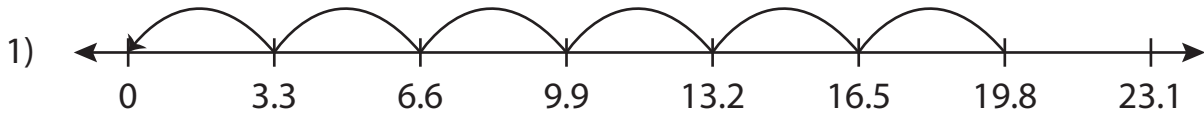
Name : _____

Answer key

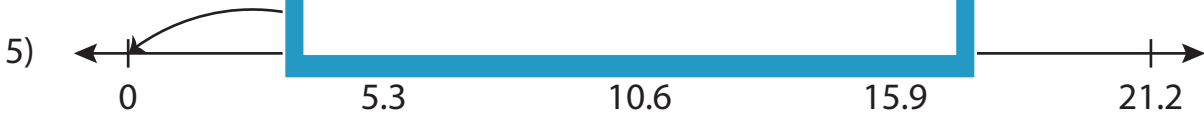
Missing Numbers

Tenth: S1

Complete the division sentence that describes each model.



$$\underline{19.8} \div 3.3 = 6$$



$$15.9 \div \underline{5.3} = 3$$



$$9.9 \div 1.1 = \underline{9}$$

PREVIEW

Gain complete access to the largest collection of worksheets in all subjects!

Members, please log in to download this worksheet.

Not a member? Please sign up to gain complete access.

www.mathworksheets4kids.com