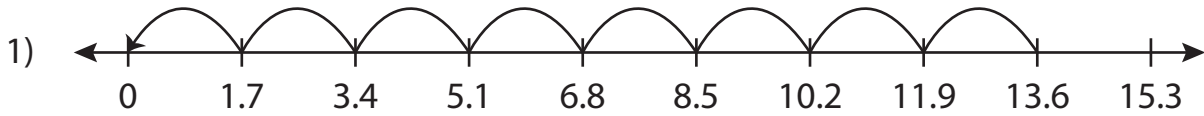


Name: _____

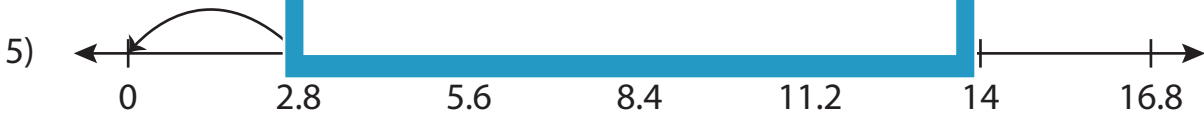
Missing Numbers

Tenth: S2

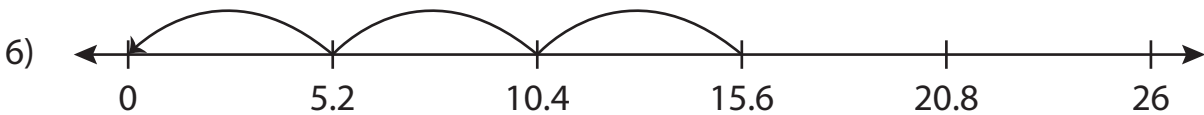
Complete the division sentence that describes each model.



$$13.6 \div 1.7 = \underline{\quad}$$



$$11.2 \div 2.8 = \underline{\quad}$$



$$\underline{\quad} \div 5.2 = 3$$

PREVIEW

Access the largest collection of worksheets for just **\$19.95** per year!

Members, please log in to download this worksheet. **Log in**

Not a member? Please sign up to gain complete access. **Sign up**

www.mathworksheets4kids.com

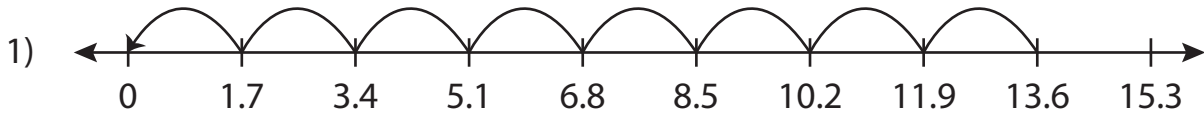
Name: _____

Answer key

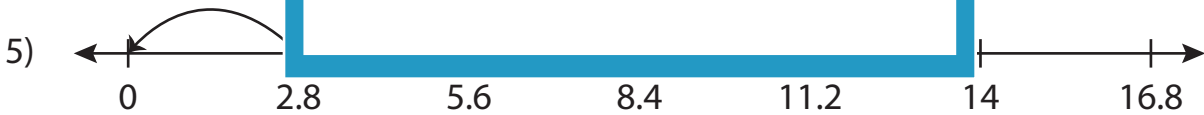
Missing Numbers

Tenth: S2

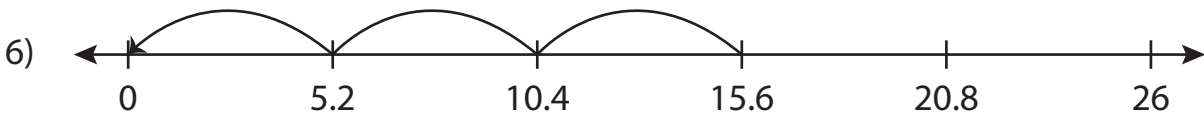
Complete the division sentence that describes each model.



$$13.6 \div 1.7 = \underline{8}$$



$$11.2 \div 2.8 = \underline{4}$$



$$\underline{15.6} \div 5.2 = 3$$

PREVIEW

Access the largest collection of worksheets for just **\$19.95** per year!

Members, please log in to download this worksheet. **Log in**

Not a member? Please sign up to gain complete access. **Sign up**

www.mathworksheets4kids.com