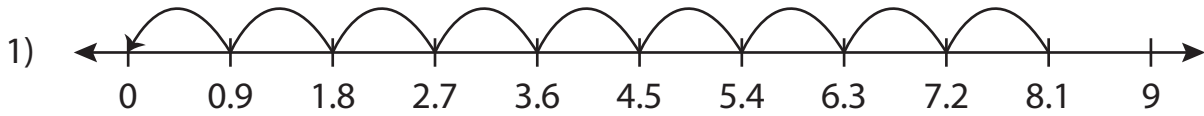


Name: _____

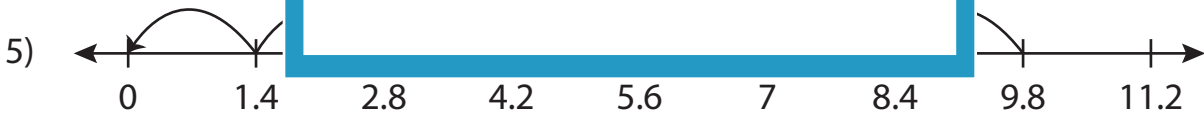
Missing Numbers

Tenth: S3

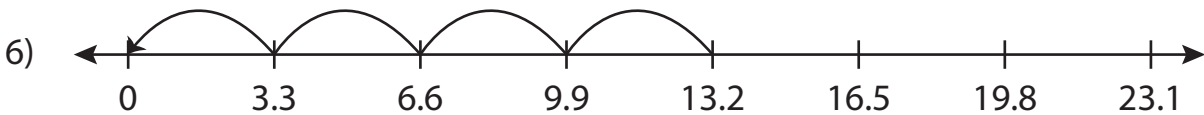
Complete the division sentence that describes each model.



$$8.1 \div \underline{\quad} = 9$$



$$\underline{\quad} \div 1.4 = 7$$



$$13.2 \div \underline{\quad} = 4$$

PREVIEW

Access the largest collection of worksheets for just **\$19.95** per year!

Members, please log in to download this worksheet. **Log in**

Not a member? Please sign up to gain complete access. **Sign up**

www.mathworksheets4kids.com

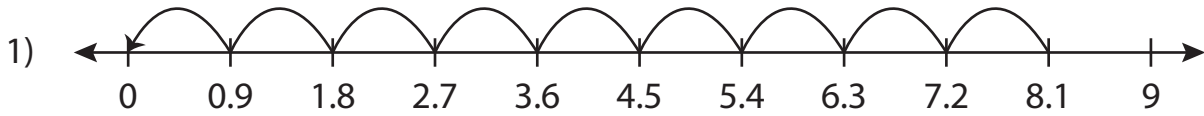
Name: _____

Answer key

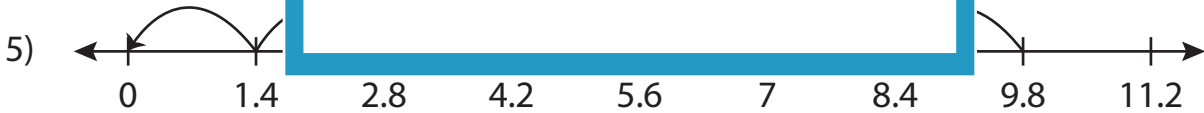
Missing Numbers

Tenth: S3

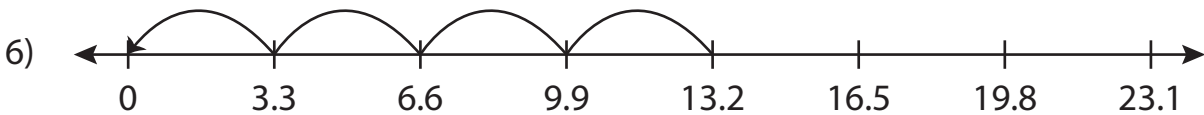
Complete the division sentence that describes each model.



$$8.1 \div \underline{0.9} = 9$$



$$\underline{9.8} \div 1.4 = 7$$



$$13.2 \div \underline{3.3} = 4$$

PREVIEW

Access the largest collection of worksheets for just **\$19.95** per year!

Members, please log in to download this worksheet. **Log in**

Not a member? Please sign up to gain complete access. **Sign up**

www.mathworksheets4kids.com