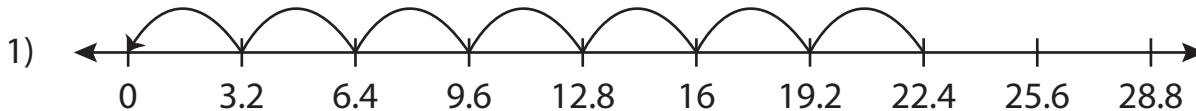


Name: _____

Missing Numbers

Tenth: S4

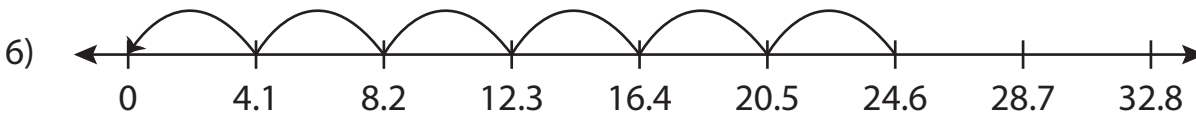
Complete the division sentence that describes each model.



$$\underline{\quad} \div 3.2 = 7$$



$$18.8 \div 9.4 = \underline{\quad}$$



$$24.6 \div \underline{\quad} = 6$$

PREVIEW

Access the largest collection of worksheets for just **\$19.95** per year!

Members, please log in to download this worksheet. **Log in**

Not a member? Please sign up to gain complete access. **Sign up**

www.mathworksheets4kids.com

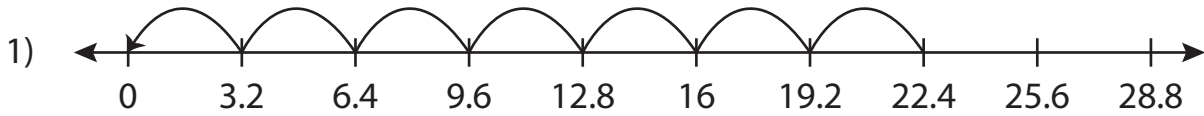
Name : _____

Answer key

Missing Numbers

Tenth: S4

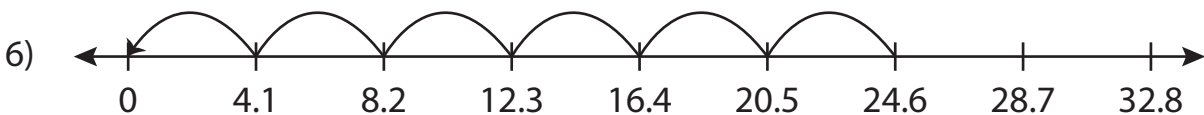
Complete the division sentence that describes each model.



$$\underline{22.4} \div 3.2 = 7$$



$$18.8 \div 9.4 = \underline{2}$$



$$24.6 \div \underline{4.1} = 6$$

PREVIEW

Access the largest collection of worksheets for just **\$19.95** per year!

Members, please log in to download this worksheet.

Log in

Not a member? Please sign up to gain complete access.

Sign up

www.mathworksheets4kids.com