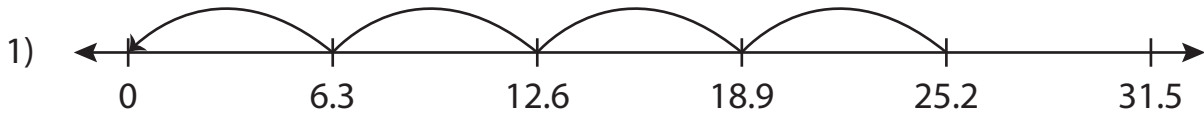


Name: _____

Missing Numbers

Tenth: S5

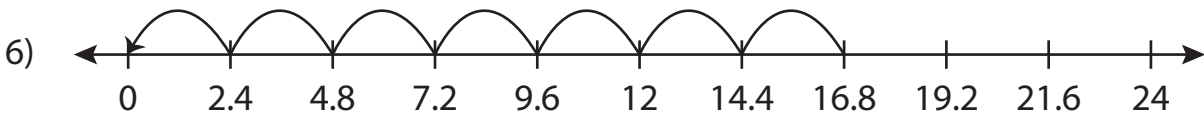
Complete the division sentence that describes each model.



$$25.2 \div 6.3 = \underline{\quad}$$



$$22.5 \div \underline{\quad} = 5$$



$$\underline{\quad} \div 2.4 = 7$$

PREVIEW

Access the largest collection of worksheets for just **\$19.95** per year!

Members, please log in to download this worksheet. **Log in**

Not a member? Please sign up to gain complete access. **Sign up**

www.mathworksheets4kids.com

Name: _____

Answer key

Missing Numbers

Tenth: S5

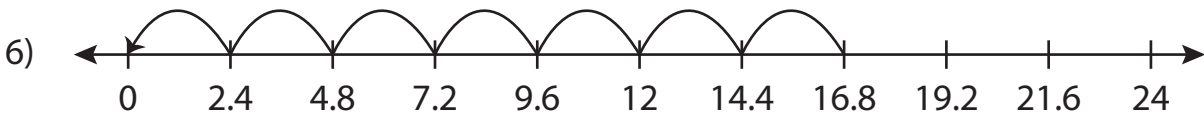
Complete the division sentence that describes each model.



$$25.2 \div 6.3 = \underline{4}$$



$$22.5 \div \underline{4.5} = 5$$



$$\underline{16.8} \div 2.4 = 7$$

PREVIEW

Access the largest collection of worksheets for just **\$19.95** per year!

Members, please log in to download this worksheet. **Log in**

Not a member? Please sign up to gain complete access. **Sign up**

www.mathworksheets4kids.com