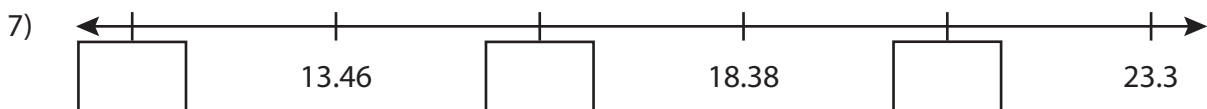
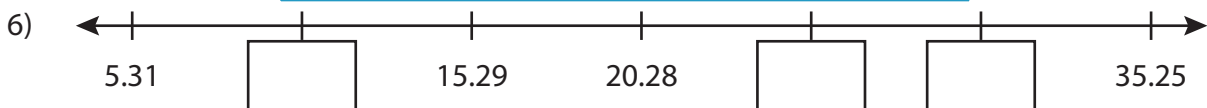
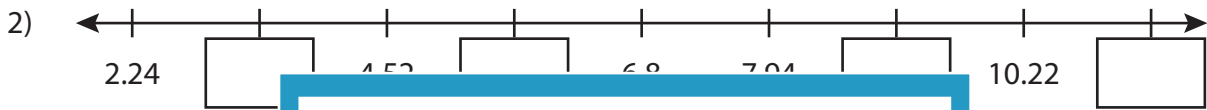


Name : \_\_\_\_\_

# Missing Numbers

Hundredth: T2S3

Write the missing numbers in each number line.



**PREVIEW**

Gain complete access to the largest collection of worksheets in all subjects!

Members, please log in to download this worksheet.

Not a member? Please sign up to gain complete access.

[www.mathworksheets4kids.com](http://www.mathworksheets4kids.com)

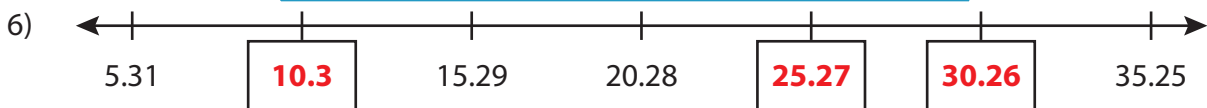
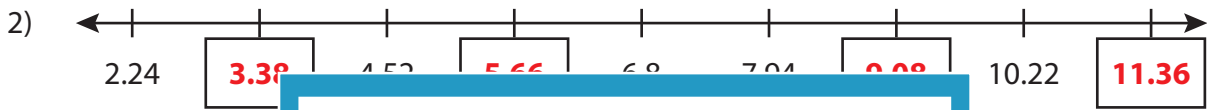

Name : \_\_\_\_\_

## Answer key

### Missing Numbers

Hundredth: T2S3

Write the missing numbers in each number line.



**PREVIEW**

Gain complete access to the largest collection of worksheets in all subjects!

Members, please log in to download this worksheet.

Not a member? Please sign up to gain complete access.

[www.mathworksheets4kids.com](http://www.mathworksheets4kids.com)