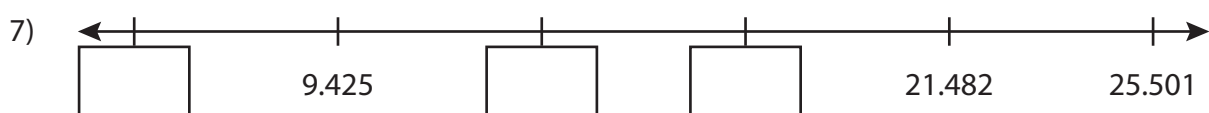
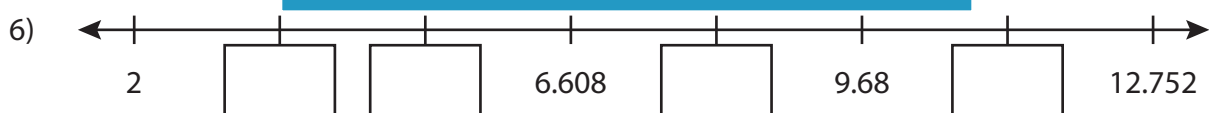
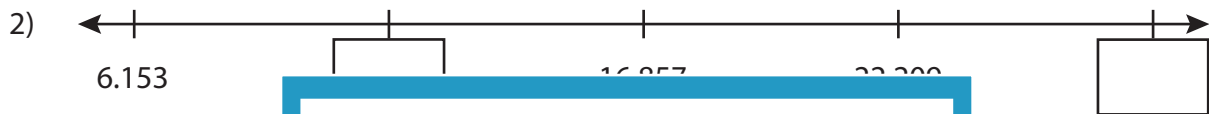
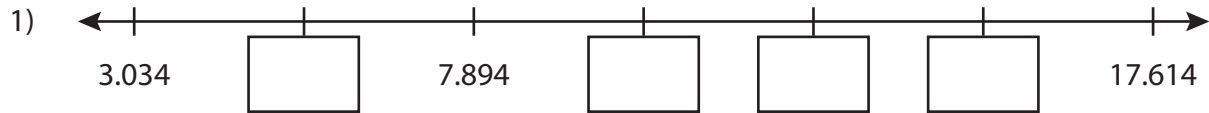


Name : _____

Missing Numbers

Thousandth: T2S3

Write the missing numbers in each number line.



PREVIEW

Gain complete access to the largest collection of worksheets in all subjects!

Members, please log in to download this worksheet.

Not a member? Please sign up to gain complete access.

www.mathworksheets4kids.com

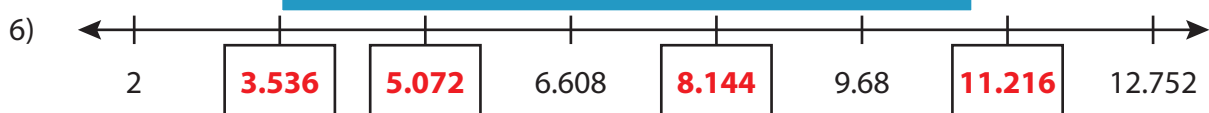
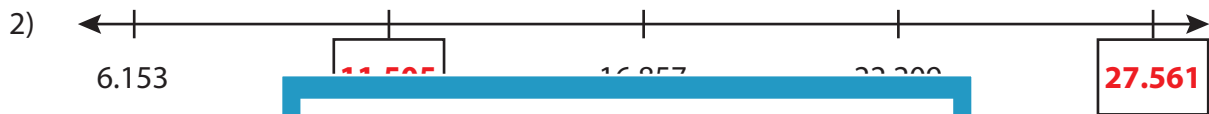
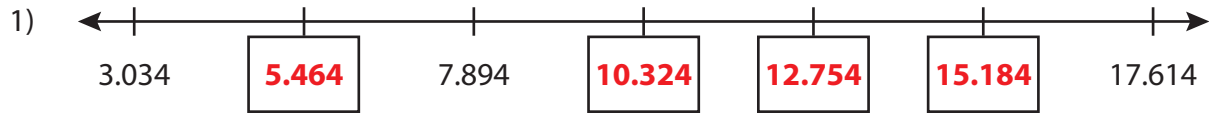
Name : _____

Answer key

Missing Numbers

Thousandth: T2S3

Write the missing numbers in each number line.



PREVIEW

Gain complete access to the largest collection of worksheets in all subjects!

Members, please log in to download this worksheet.

Not a member? Please sign up to gain complete access.

www.mathworksheets4kids.com