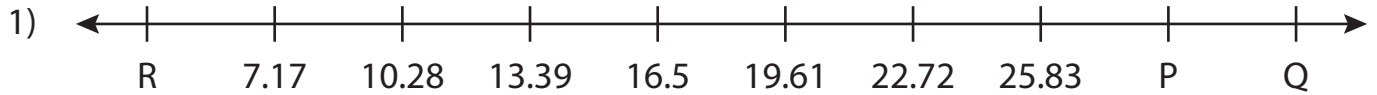


Name : _____

Missing Numbers

Hundredth: T3S1

What numbers do the letters in each number line represent?



P = _____ ; Q = _____ ; R = _____



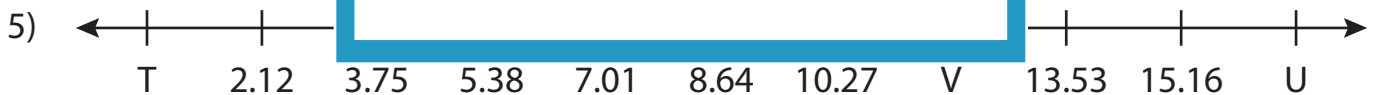
L = _____



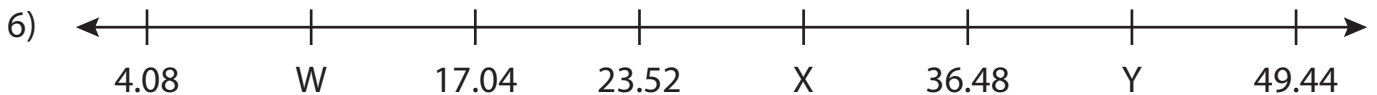
J = _____



C = _____



T = _____ ; U = _____ ; V = _____



W = _____ ; X = _____ ; Y = _____

PREVIEW

Gain complete access to the largest collection of worksheets in all subjects!

Members, please log in to download this worksheet.

Not a member? Please sign up to gain complete access.

www.mathworksheets4kids.com

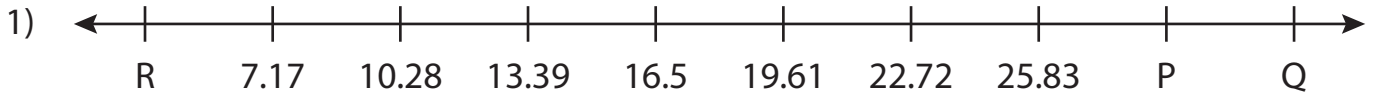
Name : _____

Answer key

Missing Numbers

Hundredth: T3S1

What numbers do the letters in each number line represent?



P = 28.94 ; Q = 32.05 ; R = 4.06



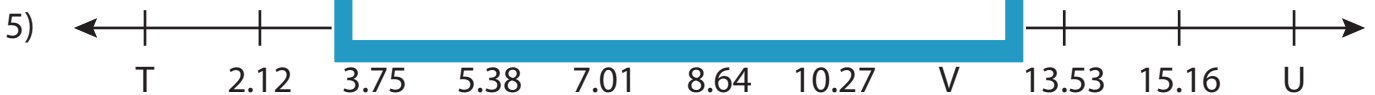
L = 17.74



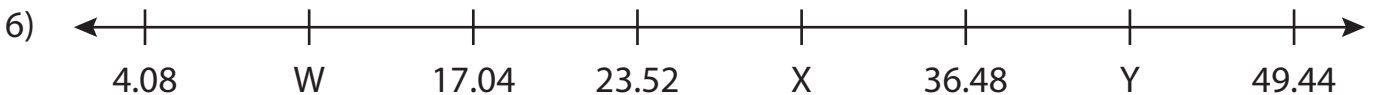
J = 15.64



C = 15.21



T = 0.49 ; U = 16.79 ; V = 11.9



W = 10.56 ; X = 30 ; Y = 42.96

PREVIEW

Gain complete access to the largest collection of worksheets in all subjects!

Members, please log in to download this worksheet.

Not a member? Please sign up to gain complete access.

www.mathworksheets4kids.com