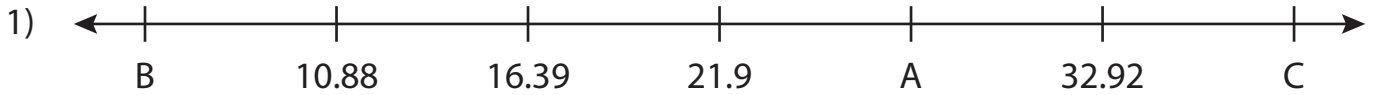


Name : \_\_\_\_\_

# Missing Numbers

Hundredth: T3S3

What numbers do the letters in each number line represent?



A = \_\_\_\_\_ ; B = \_\_\_\_\_ ; C = \_\_\_\_\_



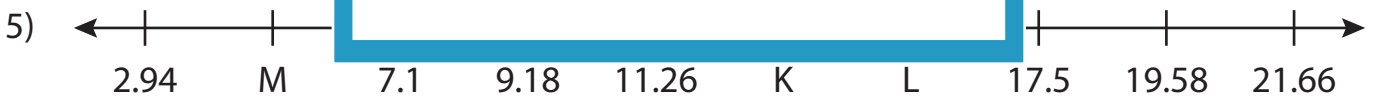
U = \_\_\_\_\_




P = \_\_\_\_\_



S = \_\_\_\_\_



K = \_\_\_\_\_ ; L = \_\_\_\_\_ ; M = \_\_\_\_\_



F = \_\_\_\_\_ ; G = \_\_\_\_\_ ; H = \_\_\_\_\_

**PREVIEW**

Gain complete access to the largest collection of worksheets in all subjects!

Members, please log in to download this worksheet.

Not a member? Please sign up to gain complete access.

[www.mathworksheets4kids.com](http://www.mathworksheets4kids.com)

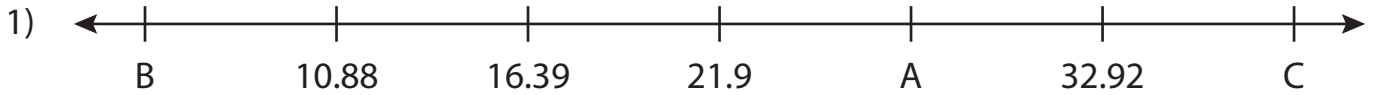
Name : \_\_\_\_\_

## Answer key

# Missing Numbers

Hundredth: T3S3

What numbers do the letters in each number line represent?



A = 27.41 ; B = 5.37 ; C = 38.43



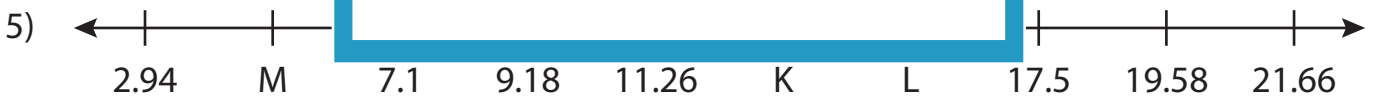
U = 13.91




P = 11.66



S = 1.9



K = 13.34 ; L = 15.42 ; M = 5.02



F = 10 ; G = 40.85 ; H = 22.34

**PREVIEW**

Gain complete access to the largest collection of worksheets in all subjects!

Members, please log in to download this worksheet.

Not a member? Please sign up to gain complete access.

[www.mathworksheets4kids.com](http://www.mathworksheets4kids.com)