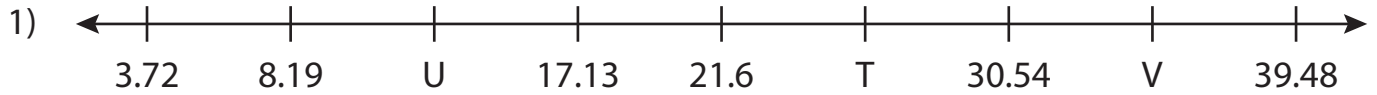


Name : _____

Missing Numbers

Hundredth: T3S4

What numbers do the letters in each number line represent?



T = _____ ; U = _____ ; V = _____



A = _____



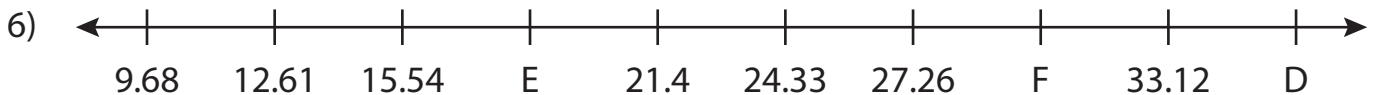
X = _____



K = _____



P = _____ ; Q = _____ ; R = _____



D = _____ ; E = _____ ; F = _____

PREVIEW

Gain complete access to the largest collection of worksheets in all subjects!

Members, please log in to download this worksheet.

Not a member? Please sign up to gain complete access.

www.mathworksheets4kids.com

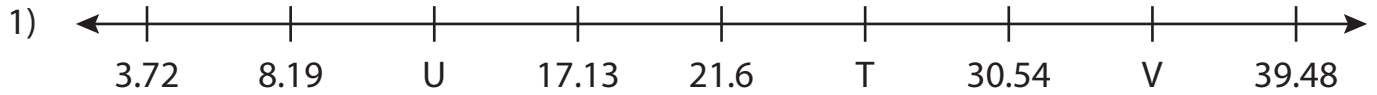
Name : _____

Answer key

Missing Numbers

Hundredth: T3S4

What numbers do the letters in each number line represent?



T = 26.07 ; U = 12.66 ; V = 35.01



A = 3.3



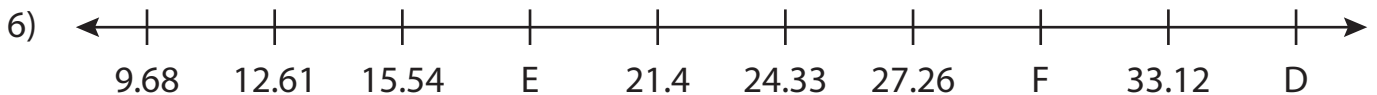
X = 3.63



K = 5.78



P = 42.29 ; Q = 20.39 ; R = 27.69



D = 36.05 ; E = 18.47 ; F = 30.19

PREVIEW

Gain complete access to the largest collection of worksheets in all subjects!

Members, please log in to download this worksheet.

Not a member? Please sign up to gain complete access.

www.mathworksheets4kids.com