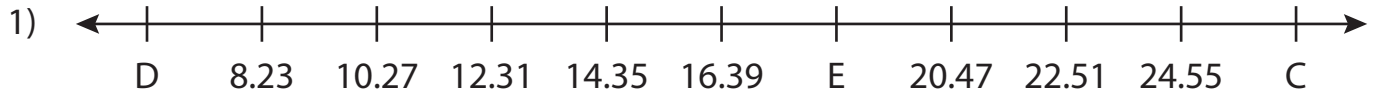


Name : _____

Missing Numbers

Hundredth: T3S5

What numbers do the letters in each number line represent?



C = _____ ; D = _____ ; E = _____



X = _____ ; Z = _____



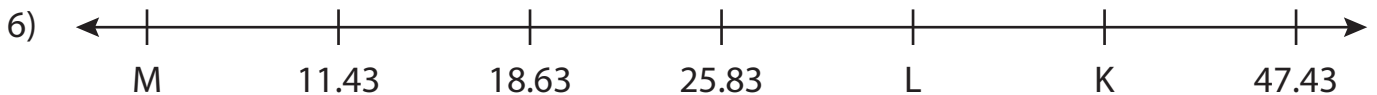
R = _____



F = _____



A = _____ ; B = _____ ; C = _____



K = _____ ; L = _____ ; M = _____

PREVIEW

Gain complete access to the largest collection of worksheets in all subjects!

Members, please log in to download this worksheet.

Not a member? Please sign up to gain complete access.

www.mathworksheets4kids.com

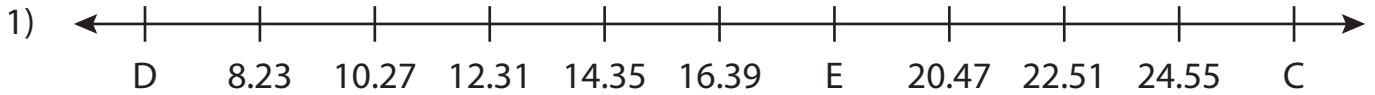
Name: _____

Answer key

Missing Numbers

Hundredth: T3S5

What numbers do the letters in each number line represent?



C = 26.59 ; D = 6.19 ; E = 18.43



X = 2.82



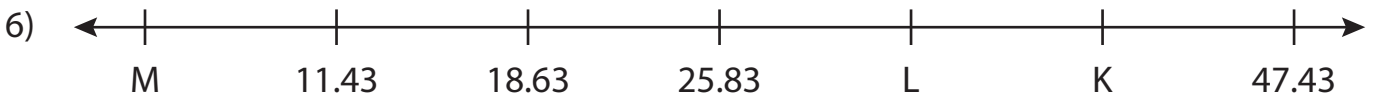
R = 2.22



F = 5.19



A = 12.16 ; B = 17.32 ; C = 27.64



K = 40.23 ; L = 33.03 ; M = 4.23

PREVIEW

Gain complete access to the largest collection of worksheets in all subjects!

Members, please log in to download this worksheet.

Not a member? Please sign up to gain complete access.

www.mathworksheets4kids.com