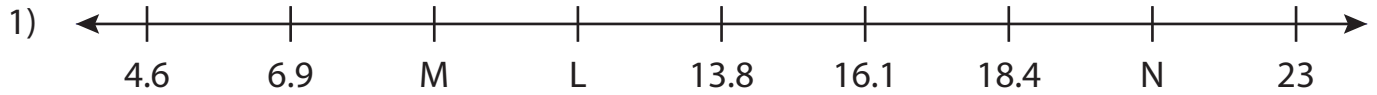


Name : _____

Missing Numbers

T3L1S1

What numbers do the letters in each number line represent?



L = _____ ; M = _____ ; N = _____



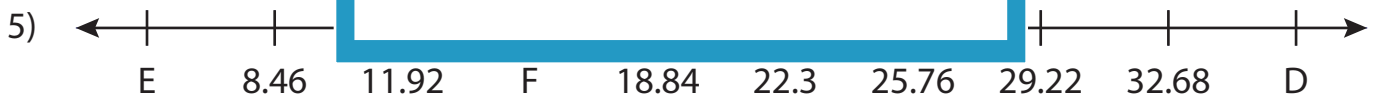
X = _____ ; Z = _____



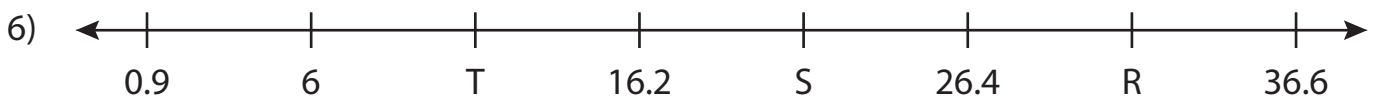
H = _____ ; F = _____



B = _____ ; C = _____



D = _____ ; E = _____ ; F = _____



R = _____ ; S = _____ ; T = _____

PREVIEW

Gain complete access to the largest collection of worksheets in all subjects!

Members, please log in to download this worksheet.

Not a member? Please sign up to gain complete access.

www.mathworksheets4kids.com

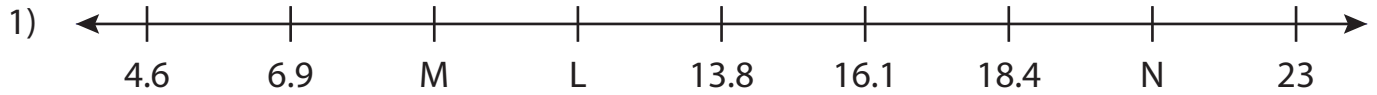
Name : _____

Answer key

Missing Numbers

T3L1S1

What numbers do the letters in each number line represent?



L = 11.5 ; M = 9.2 ; N = 20.7



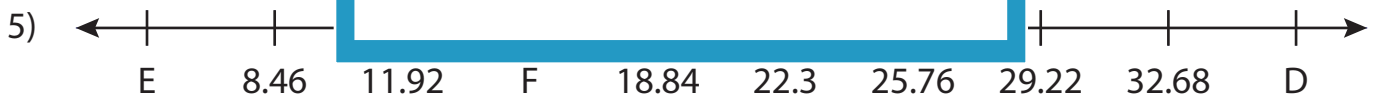
X = 10.25



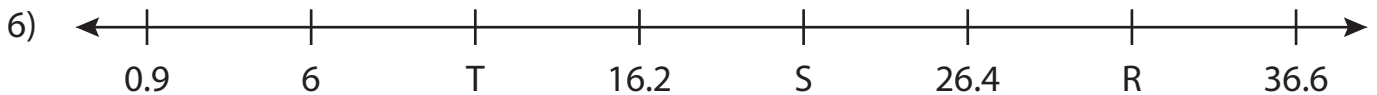
F = 5.6



B = 7.35



D = 36.14 ; E = 5 ; F = 15.38



R = 31.5 ; S = 21.3 ; T = 11.1

PREVIEW

Gain complete access to the largest collection of worksheets in all subjects!

Members, please log in to download this worksheet.

Not a member? Please sign up to gain complete access.

www.mathworksheets4kids.com