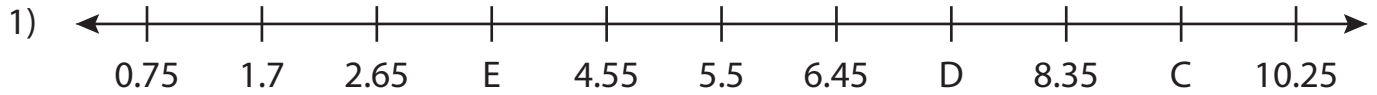


Name : _____

Missing Numbers

T3L1S3

What numbers do the letters in each number line represent?



C = _____ ; D = _____ ; E = _____



P = _____




J = _____



W = _____



T = _____ ; U = _____ ; V = _____



L = _____ ; M = _____ ; N = _____

PREVIEW

Gain complete access to the largest collection of worksheets in all subjects!

Members, please log in to download this worksheet.

Not a member? Please sign up to gain complete access.

www.mathworksheets4kids.com

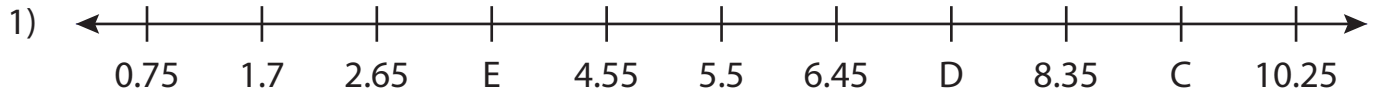
Name : _____

Answer key

Missing Numbers

T3L1S3

What numbers do the letters in each number line represent?



C = 9.3 ; D = 7.4 ; E = 3.6



P = 12.29




J = 21.68



W = 21.79



T = 38.2 ; U = 30.65 ; V = 23.1



L = 7.6 ; M = 36.6 ; N = 19.2

PREVIEW

Gain complete access to the largest collection of worksheets in all subjects!

Members, please log in to download this worksheet.

Not a member? Please sign up to gain complete access.

www.mathworksheets4kids.com