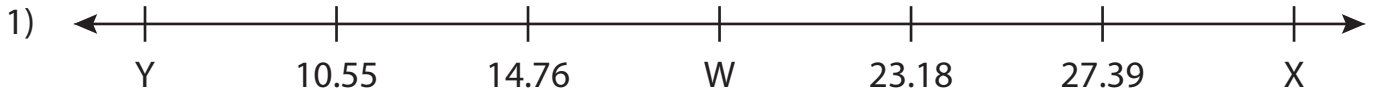


Name : _____

Missing Numbers

T3L1S4

What numbers do the letters in each number line represent?



W = _____ ; X = _____ ; Y = _____



F = _____



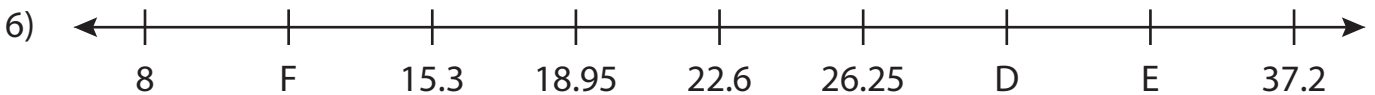
A = _____



Q = _____



L = _____ ; M = _____ ; N = _____



D = _____ ; E = _____ ; F = _____

PREVIEW

Gain complete access to the largest collection of worksheets in all subjects!

Members, please log in to download this worksheet.

Not a member? Please sign up to gain complete access.

www.mathworksheets4kids.com

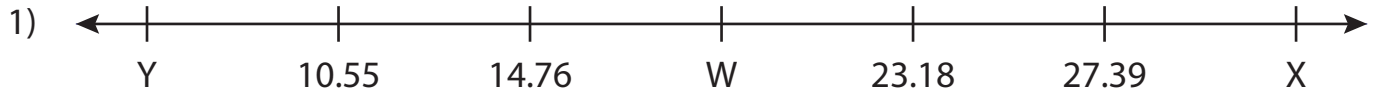
Name : _____

Answer key

Missing Numbers

T3L1S4

What numbers do the letters in each number line represent?



W = 18.97 ; X = 31.6 ; Y = 6.34



F = 3.42



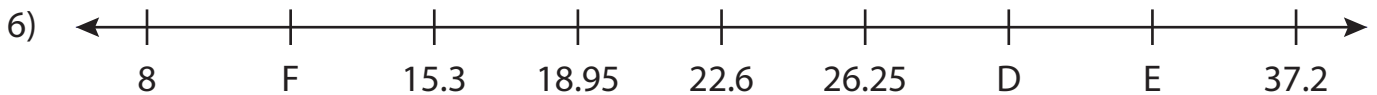
A = 7.3



Q = 0.56



L = 44.5 ; M = 3.2 ; N = 20.9



D = 29.9 ; E = 33.55 ; F = 11.65

PREVIEW

Gain complete access to the largest collection of worksheets in all subjects!

Members, please log in to download this worksheet.

Not a member? Please sign up to gain complete access.

www.mathworksheets4kids.com