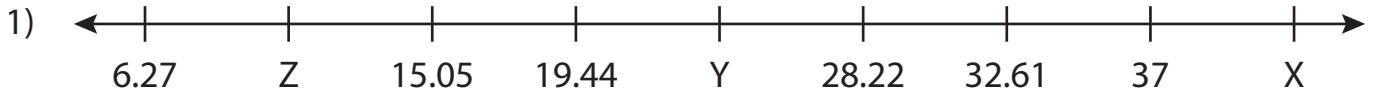


Name : \_\_\_\_\_

# Missing Numbers

T3L2S1

What numbers do the letters in each number line represent?



X = \_\_\_\_\_ ; Y = \_\_\_\_\_ ; Z = \_\_\_\_\_



B = \_\_\_\_\_



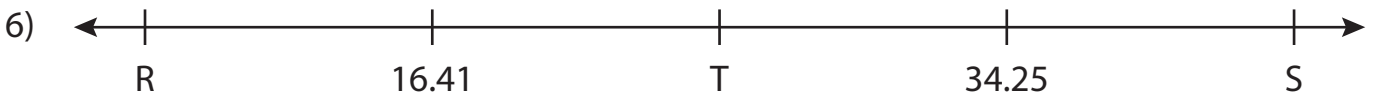
F = \_\_\_\_\_



Q = \_\_\_\_\_



D = \_\_\_\_\_ ; E = \_\_\_\_\_ ; F = \_\_\_\_\_



R = \_\_\_\_\_ ; S = \_\_\_\_\_ ; T = \_\_\_\_\_

**PREVIEW**

Gain complete access to the largest collection of worksheets in all subjects!

Members, please log in to download this worksheet.

Not a member? Please sign up to gain complete access.

[www.mathworksheets4kids.com](http://www.mathworksheets4kids.com)

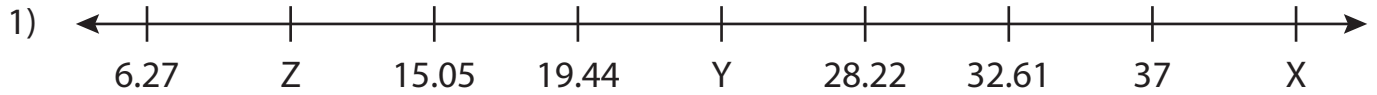
Name : \_\_\_\_\_

## Answer key

# Missing Numbers

T3L2S1

What numbers do the letters in each number line represent?



X = 41.39 ; Y = 23.83 ; Z = 10.66



B = 15.042



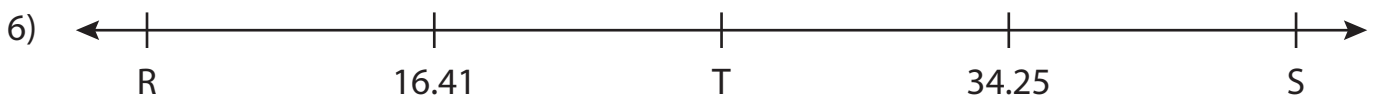
F = 13.58



Q = 29.36



D = 21.375 ; E = 8.25 ; F = 18.75



R = 7.49 ; S = 43.17 ; T = 25.33

**PREVIEW**

Gain complete access to the largest collection of worksheets in all subjects!

Members, please log in to download this worksheet.

Not a member? Please sign up to gain complete access.

[www.mathworksheets4kids.com](http://www.mathworksheets4kids.com)