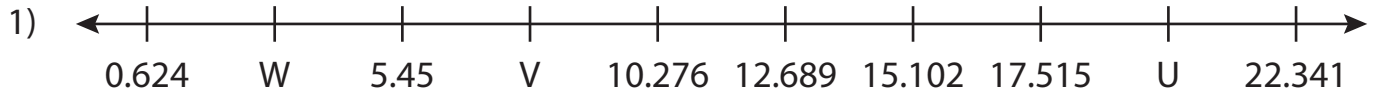


Name : _____

Missing Numbers

T3L2S2

What numbers do the letters in each number line represent?



U = _____ ; V = _____ ; W = _____



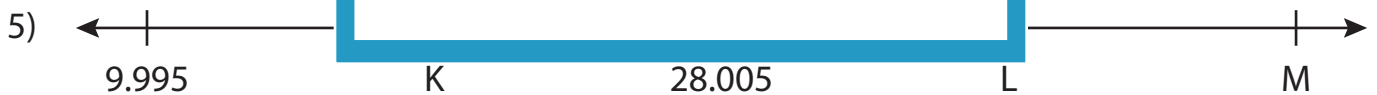
S = _____



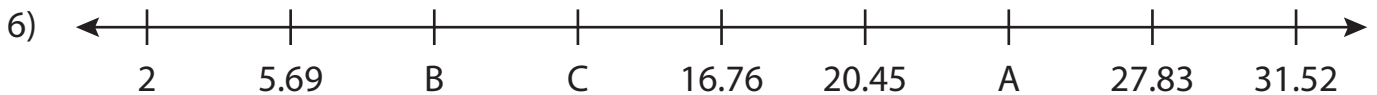
P = _____



E = _____



K = _____ ; L = _____ ; M = _____



A = _____ ; B = _____ ; C = _____

PREVIEW

Gain complete access to the largest collection of worksheets in all subjects!

Members, please log in to download this worksheet.

Not a member? Please sign up to gain complete access.

www.mathworksheets4kids.com

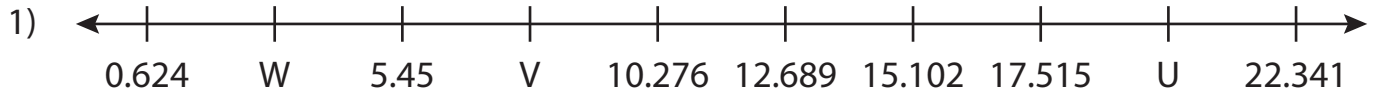
Name : _____

Answer key

Missing Numbers

T3L2S2

What numbers do the letters in each number line represent?



U = 19.928 ; V = 7.863 ; W = 3.037



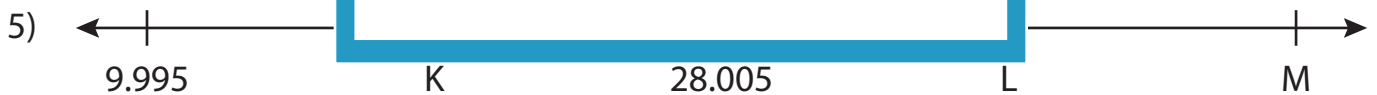
S = 7.21



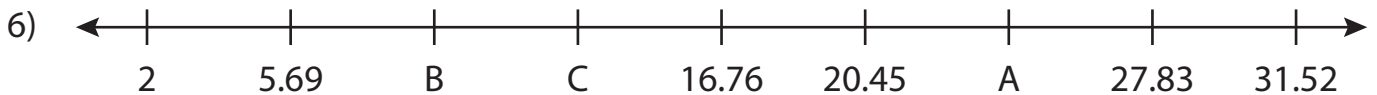
P = 7.22



E = 37.349



K = 19 ; L = 37.01 ; M = 46.015



A = 24.14 ; B = 9.38 ; C = 13.07

PREVIEW

Gain complete access to the largest collection of worksheets in all subjects!

Members, please log in to download this worksheet.

Not a member? Please sign up to gain complete access.

www.mathworksheets4kids.com