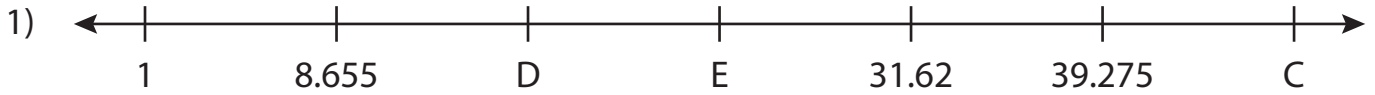


Name : _____

Missing Numbers

T3L2S3

What numbers do the letters in each number line represent?



C = _____ ; D = _____ ; E = _____



P = _____




J = _____



T = _____



W = _____ ; X = _____ ; Y = _____



L = _____ ; M = _____ ; N = _____

PREVIEW

Gain complete access to the largest collection of worksheets in all subjects!

Members, please log in to download this worksheet.

Not a member? Please sign up to gain complete access.

www.mathworksheets4kids.com

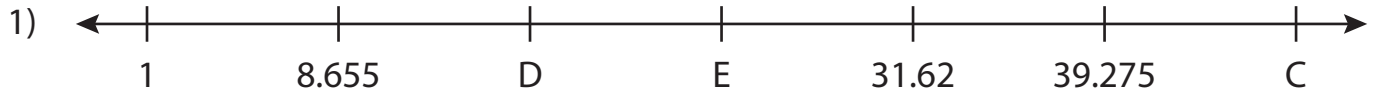
Name : _____

Answer key

Missing Numbers

T3L2S3

What numbers do the letters in each number line represent?



C = 46.93 ; D = 16.31 ; E = 23.965



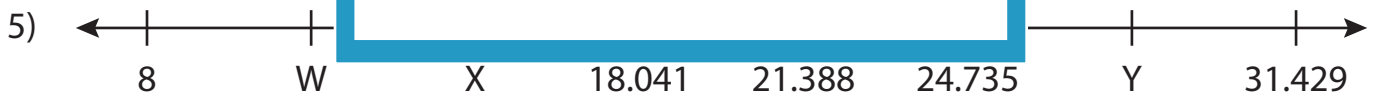
P = 17.32



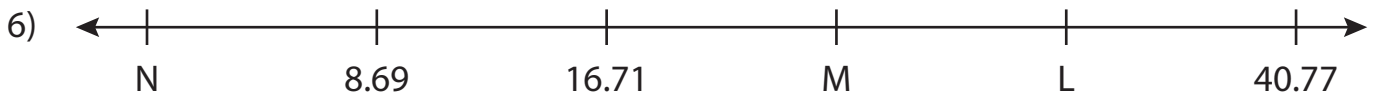
J = 17.032



T = 17.745



W = 11.347 ; X = 14.694 ; Y = 28.082



L = 32.75 ; M = 24.73 ; N = 0.67

PREVIEW

Gain complete access to the largest collection of worksheets in all subjects!

Members, please log in to download this worksheet.

Not a member? Please sign up to gain complete access.

www.mathworksheets4kids.com