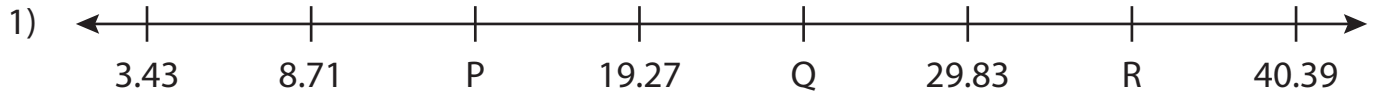


Name : _____

Missing Numbers

T3L2S4

What numbers do the letters in each number line represent?



P = _____ ; Q = _____ ; R = _____



T = _____



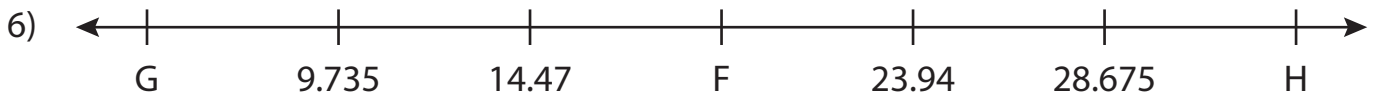
A = _____



X = _____



C = _____ ; D = _____ ; E = _____



F = _____ ; G = _____ ; H = _____

PREVIEW

Gain complete access to the largest collection of worksheets in all subjects!

Members, please log in to download this worksheet.

Not a member? Please sign up to gain complete access.

www.mathworksheets4kids.com


Name : _____

Answer key

Missing Numbers

T3L2S4

What numbers do the letters in each number line represent?



P = 13.99 ; Q = 24.55 ; R = 35.11



T = 795



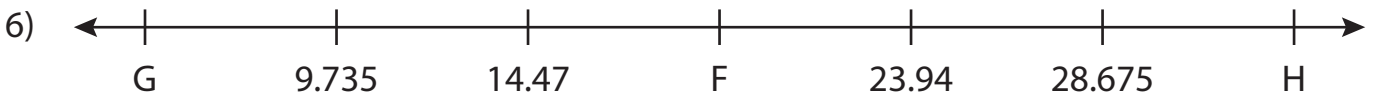
A = .984



X = 1.89



C = 31.893 ; D = 38 ; E = 13.572



F = 19.205 ; G = 5 ; H = 33.41

PREVIEW

Gain complete access to the largest collection of worksheets in all subjects!

Members, please log in to download this worksheet.

Not a member? Please sign up to gain complete access.

www.mathworksheets4kids.com