

Name : \_\_\_\_\_

# Missing Numbers

T3L2S5

What numbers do the letters in each number line represent?



A = \_\_\_\_\_ ; B = \_\_\_\_\_ ; C = \_\_\_\_\_



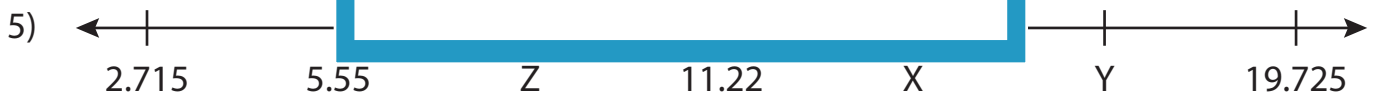
R = \_\_\_\_\_



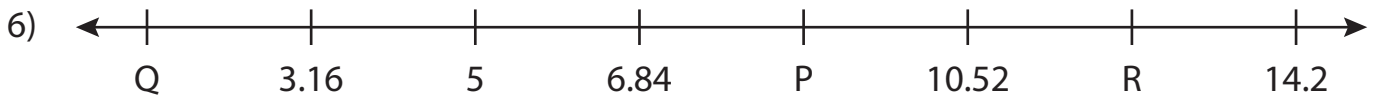
U = \_\_\_\_\_



L = \_\_\_\_\_



X = \_\_\_\_\_ ; Y = \_\_\_\_\_ ; Z = \_\_\_\_\_



P = \_\_\_\_\_ ; Q = \_\_\_\_\_ ; R = \_\_\_\_\_

**PREVIEW**

Gain complete access to the largest collection of worksheets in all subjects!

Members, please log in to download this worksheet.

Not a member? Please sign up to gain complete access.

[www.mathworksheets4kids.com](http://www.mathworksheets4kids.com)

Name : \_\_\_\_\_

## Answer key

# Missing Numbers

T3L2S5

What numbers do the letters in each number line represent?



A = 15.527 ; B = 5.126 ; C = 22.461



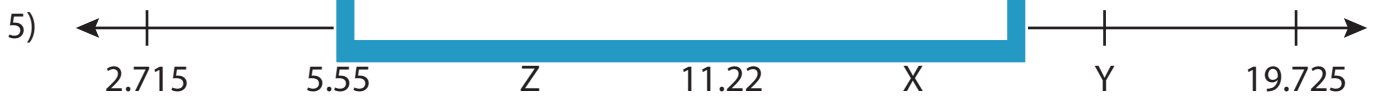
R = 4



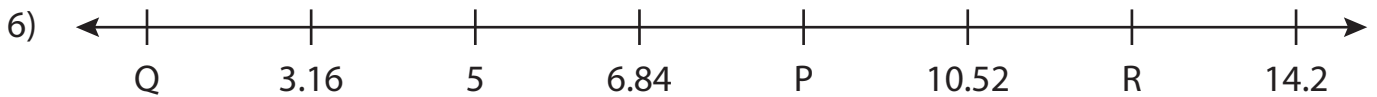
U = 3.85



L = 208



X = 14.055 ; Y = 16.89 ; Z = 8.385



P = 8.68 ; Q = 1.32 ; R = 12.36

**PREVIEW**

Gain complete access to the largest collection of worksheets in all subjects!

Members, please log in to download this worksheet.

Not a member? Please sign up to gain complete access.

[www.mathworksheets4kids.com](http://www.mathworksheets4kids.com)