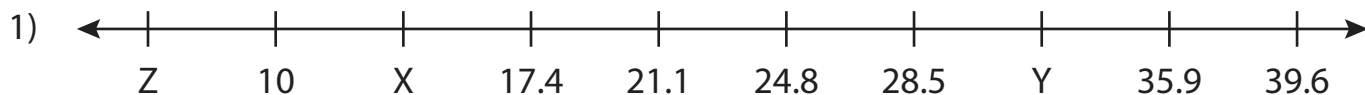


Name : \_\_\_\_\_

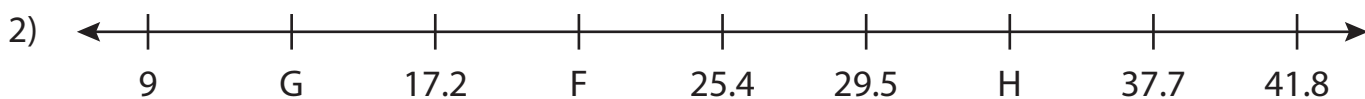
## Missing Numbers

Tenth: T3S1

What numbers do the letters in each number line represent?



$X = \underline{\hspace{2cm}}$ ;  $Y = \underline{\hspace{2cm}}$ ;  $Z = \underline{\hspace{2cm}}$



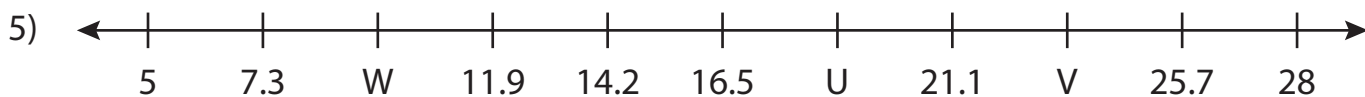
$F = \underline{\hspace{2cm}}$ ;  $G = \underline{\hspace{2cm}}$ ;  $H = \underline{\hspace{2cm}}$



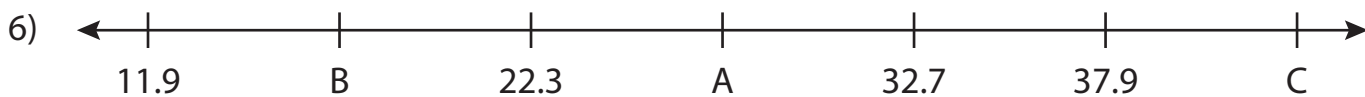
$Q = \underline{\hspace{2cm}}$ ;  $R = \underline{\hspace{2cm}}$ ;  $S = \underline{\hspace{2cm}}$



$D = \underline{\hspace{2cm}}$ ;  $E = \underline{\hspace{2cm}}$ ;  $F = \underline{\hspace{2cm}}$



$U = \underline{\hspace{2cm}}$ ;  $V = \underline{\hspace{2cm}}$ ;  $W = \underline{\hspace{2cm}}$



$A = \underline{\hspace{2cm}}$ ;  $B = \underline{\hspace{2cm}}$ ;  $C = \underline{\hspace{2cm}}$

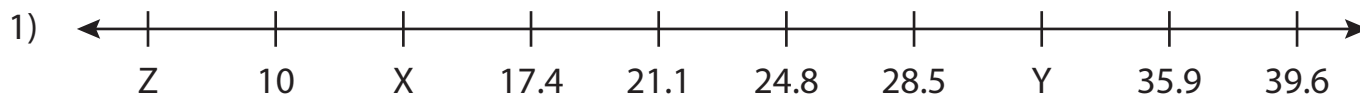
Name : \_\_\_\_\_

## Answer key

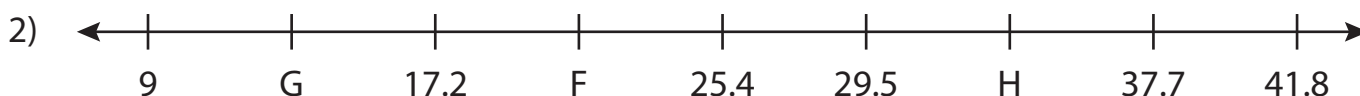
# Missing Numbers

Tenth: T3S1

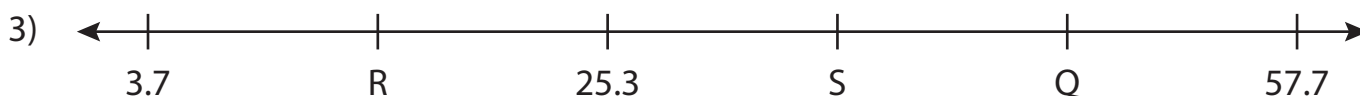
What numbers do the letters in each number line represent?



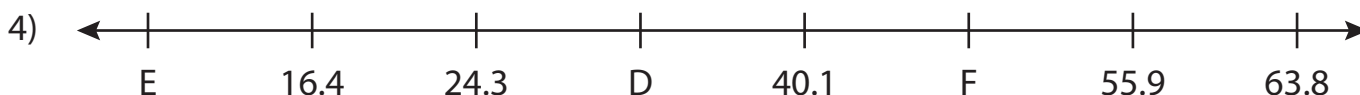
$$X = \underline{13.7} ; \quad Y = \underline{32.2} ; \quad Z = \underline{6.3}$$



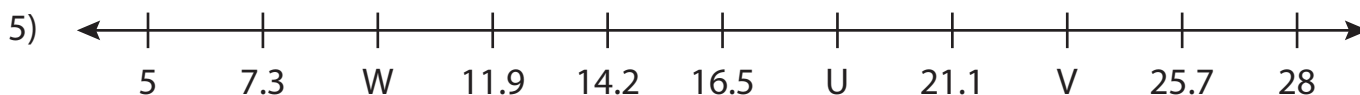
$$F = \underline{21.3} ; \quad G = \underline{13.1} ; \quad H = \underline{33.6}$$



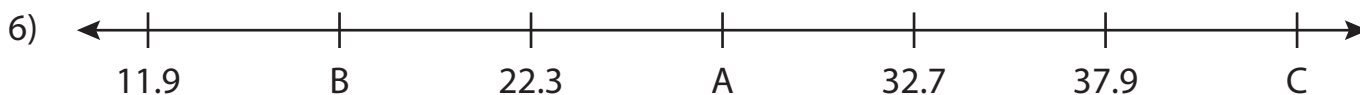
$$Q = \underline{46.9} ; \quad R = \underline{14.5} ; \quad S = \underline{36.1}$$



$$D = \underline{32.2} ; \quad E = \underline{8.5} ; \quad F = \underline{48}$$



$$U = \underline{18.8} ; \quad V = \underline{23.4} ; \quad W = \underline{9.6}$$



$$A = \underline{27.5} ; \quad B = \underline{17.1} ; \quad C = \underline{43.1}$$