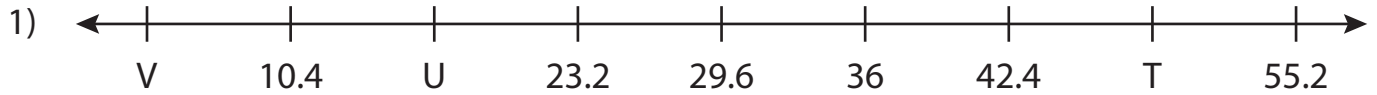


Name : \_\_\_\_\_

# Missing Numbers

Tenth: T3S2

What numbers do the letters in each number line represent?



T = \_\_\_\_\_ ; U = \_\_\_\_\_ ; V = \_\_\_\_\_



P = \_\_\_\_\_ ; Q = \_\_\_\_\_ ; R = \_\_\_\_\_



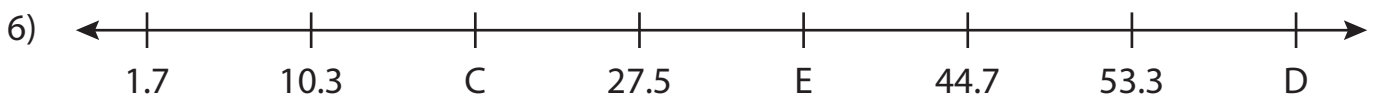
J = \_\_\_\_\_ ; K = \_\_\_\_\_



W = \_\_\_\_\_ ; X = \_\_\_\_\_ ; Y = \_\_\_\_\_



L = \_\_\_\_\_ ; M = \_\_\_\_\_ ; N = \_\_\_\_\_



C = \_\_\_\_\_ ; D = \_\_\_\_\_ ; E = \_\_\_\_\_

**PREVIEW**

Gain complete access to the largest collection of worksheets in all subjects!

Members, please log in to download this worksheet.

Not a member? Please sign up to gain complete access.

[www.mathworksheets4kids.com](http://www.mathworksheets4kids.com)

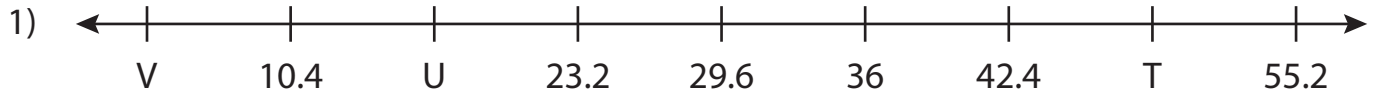
Name: \_\_\_\_\_

## Answer key

# Missing Numbers

Tenth: T3S2

What numbers do the letters in each number line represent?



T = 48.8 ; U = 16.8 ; V = 4



P = 16.6 ; R = 32.9



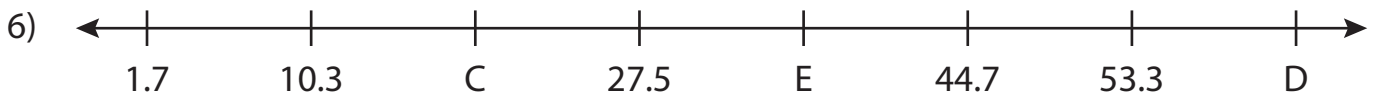
J = 18.2



W = 12 ; Y = 48



L = 12.6 ; M = 28.6 ; N = 25.4



C = 18.9 ; D = 61.9 ; E = 36.1

**PREVIEW**

Gain complete access to the largest collection of worksheets in all subjects!

Members, please log in to download this worksheet.

Not a member? Please sign up to gain complete access.

[www.mathworksheets4kids.com](http://www.mathworksheets4kids.com)