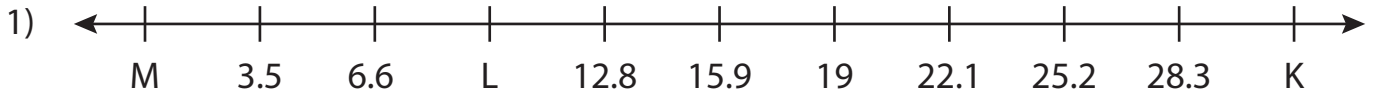


Name : _____

Missing Numbers

Tenth: T3S3

What numbers do the letters in each number line represent?



K = _____ ; L = _____ ; M = _____



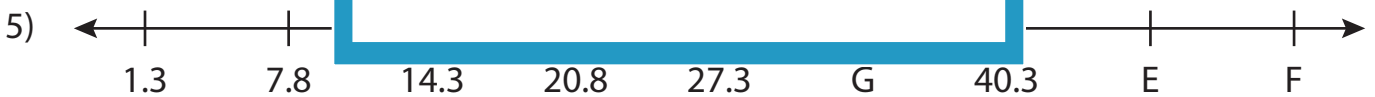
B = _____



R = _____



V = _____



E = _____ ; F = _____ ; G = _____



S = _____ ; T = _____ ; U = _____

PREVIEW

Gain complete access to the largest collection of worksheets in all subjects!

Members, please log in to download this worksheet.

Not a member? Please sign up to gain complete access.

www.mathworksheets4kids.com

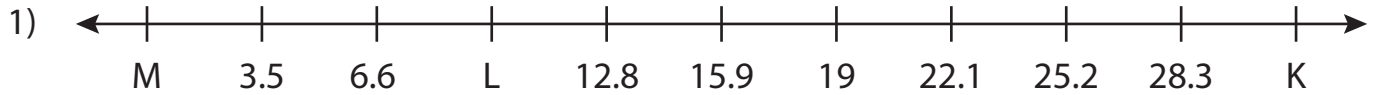
Name : _____

Answer key

Missing Numbers

Tenth: T3S3

What numbers do the letters in each number line represent?



K = 31.4 ; L = 9.7 ; M = 0.4



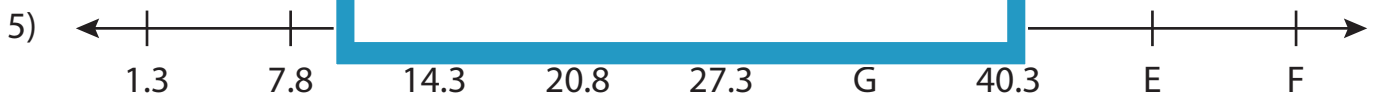
B = 11.4



R = 38.6



V = 43.8



E = 46.8 ; F = 53.3 ; G = 33.8



S = 19.2 ; T = 28.4 ; U = 16.9

PREVIEW

Gain complete access to the largest collection of worksheets in all subjects!

Members, please log in to download this worksheet.

Not a member? Please sign up to gain complete access.

www.mathworksheets4kids.com