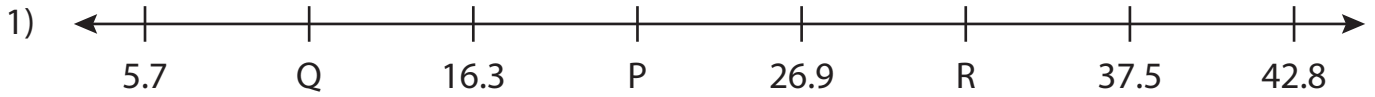


Name : _____

Missing Numbers

Tenth: T3S4

What numbers do the letters in each number line represent?



P = _____ ; Q = _____ ; R = _____



U = _____



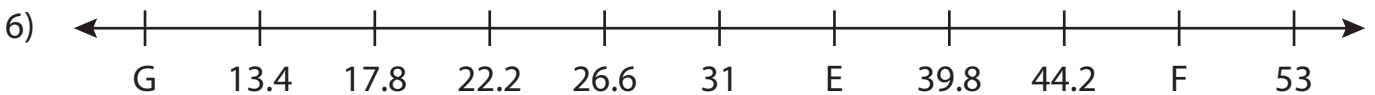
B = _____



X = _____



K = _____ ; L = _____ ; M = _____



E = _____ ; F = _____ ; G = _____

PREVIEW

Gain complete access to the largest collection of worksheets in all subjects!

Members, please log in to download this worksheet.

Not a member? Please sign up to gain complete access.

www.mathworksheets4kids.com

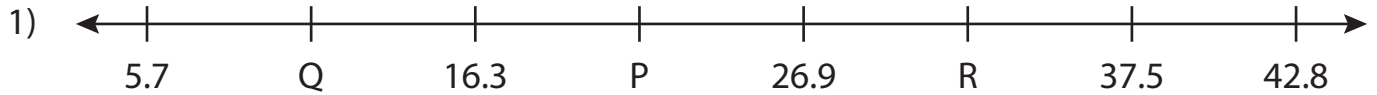
Name : _____

Answer key

Missing Numbers

Tenth: T3S4

What numbers do the letters in each number line represent?



P = 21.6 ; Q = 11 ; R = 32.2



U = 13



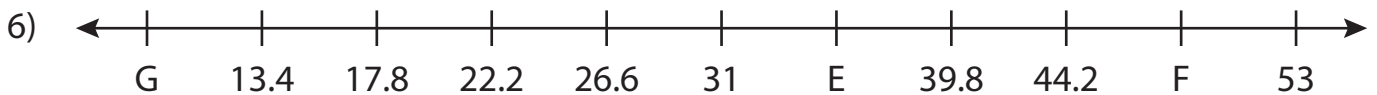
B = 14.4



X = 15.7



K = 43 ; L = 19.6 ; M = 66.4



E = 35.4 ; F = 48.6 ; G = 9

PREVIEW

Gain complete access to the largest collection of worksheets in all subjects!

Members, please log in to download this worksheet.

Not a member? Please sign up to gain complete access.

www.mathworksheets4kids.com