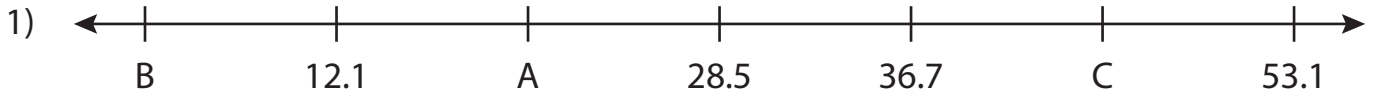


Name : _____

Missing Numbers

Tenth: T3S5

What numbers do the letters in each number line represent?



A = _____ ; B = _____ ; C = _____



P = _____




F = _____



T = _____



X = _____ ; Y = _____ ; Z = _____



D = _____ ; E = _____ ; F = _____

PREVIEW

Gain complete access to the largest collection of worksheets in all subjects!

Members, please log in to download this worksheet.

Not a member? Please sign up to gain complete access.

www.mathworksheets4kids.com

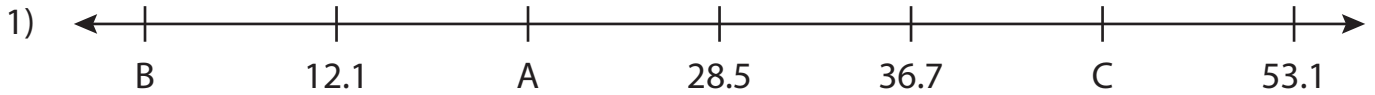
Name : _____

Answer key

Missing Numbers

Tenth: T3S5

What numbers do the letters in each number line represent?



A = 20.3 ; B = 3.9 ; C = 44.9



P = 32.9




F = 55.4



T = 45.6



X = 49.6 ; Y = 19.2 ; Z = 26.8



D = 36.3 ; E = 47.7 ; F = 13.5

PREVIEW

Gain complete access to the largest collection of worksheets in all subjects!

Members, please log in to download this worksheet.

Not a member? Please sign up to gain complete access.

www.mathworksheets4kids.com