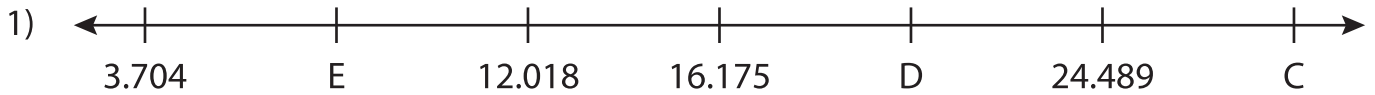


Name : _____

Missing Numbers

Thousandth: T3S2

What numbers do the letters in each number line represent?



C = _____ ; D = _____ ; E = _____



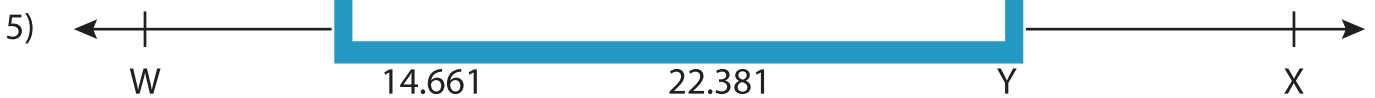
P = _____



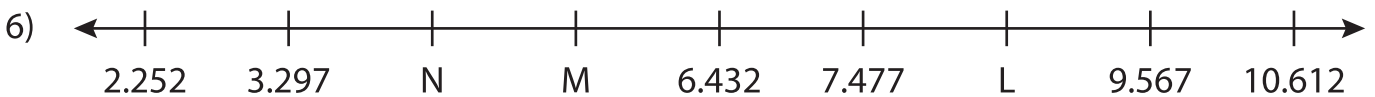
J = _____



T = _____



W = _____ ; X = _____ ; Y = _____



L = _____ ; M = _____ ; N = _____

PREVIEW

Gain complete access to the largest collection of worksheets in all subjects!

Members, please log in to download this worksheet.

Not a member? Please sign up to gain complete access.

www.mathworksheets4kids.com