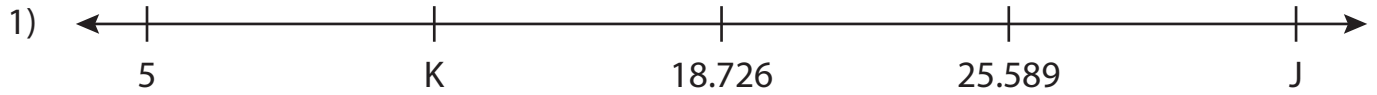


Name : _____

Missing Numbers

Thousandth: T3S3

What numbers do the letters in each number line represent?



J = _____ ; K = _____ ; L = _____



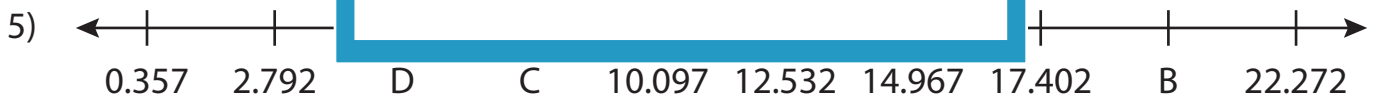
X = _____




F = _____



V = _____



B = _____ ; C = _____ ; D = _____



R = _____ ; S = _____ ; T = _____

PREVIEW

Gain complete access to the largest collection of worksheets in all subjects!

Members, please log in to download this worksheet.

Not a member? Please sign up to gain complete access.

www.mathworksheets4kids.com

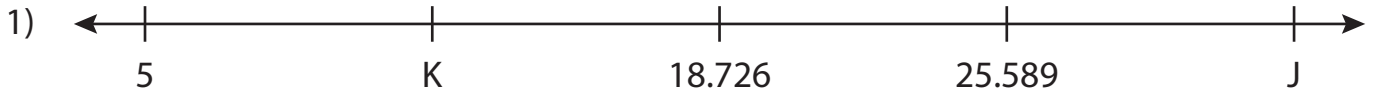
Name : _____

Answer key

Missing Numbers

Thousandth: T3S3

What numbers do the letters in each number line represent?



J = 32.452 ; K = 11.863 ; L = 25.589



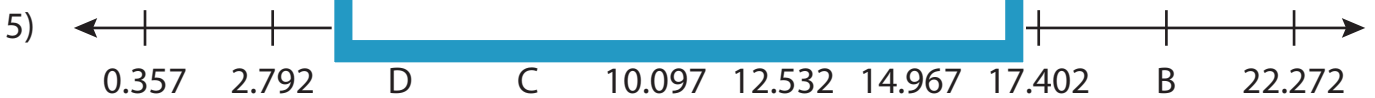
X = 7.734




F = 13.826



V = 9.077



B = 19.837 ; C = 7.662 ; D = 5.227



R = 28.001 ; S = 15.455 ; T = 11.273

PREVIEW

Gain complete access to the largest collection of worksheets in all subjects!

Members, please log in to download this worksheet.

Not a member? Please sign up to gain complete access.

www.mathworksheets4kids.com